


# Counting Christmas Objects (H)

Name: \_\_\_\_\_


Date: \_\_\_\_\_

Count how many objects there are in each group.


1. There are \_\_\_\_\_ Christmas trees in the group below.




2. There are \_\_\_\_\_ baubles in the group below.



3. There are \_\_\_\_\_ bows in the group below.



4. There are \_\_\_\_\_ presents in the group below.




# Counting Christmas Objects (H) Answers

Name: \_\_\_\_\_


Date: \_\_\_\_\_

Count how many objects there are in each group.


1. There are 7 Christmas trees in the group below.



2. There are 7 baubles in the group below.



3. There are 40 bows in the group below.



4. There are 45 presents in the group below.

