

Counting Christmas Objects (A)

Name: _____


Date: _____

Count how many objects there are in each group.

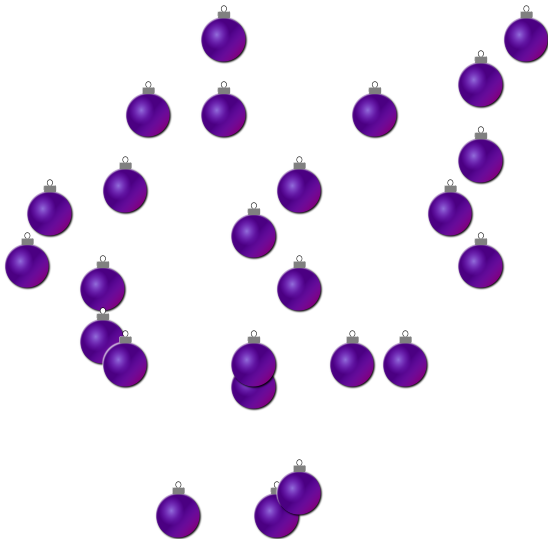
1. There are _____ bows in the group below.




2. There are _____ presents in the group below.



3. There are _____ baubles in the group below.



4. There are _____ Christmas trees in the group below.



Counting Christmas Objects (A) Answers

Name: _____


Date: _____

Count how many objects there are in each group.

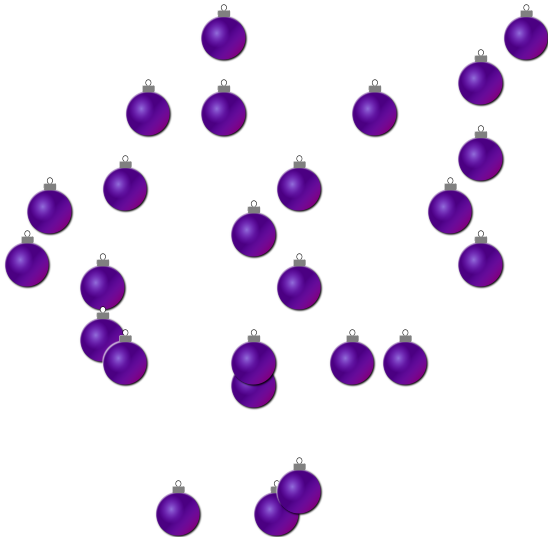
1. There are 12 bows in the group below.




2. There are 10 presents in the group below.



3. There are 25 baubles in the group below.



4. There are 9 Christmas trees in the group below.



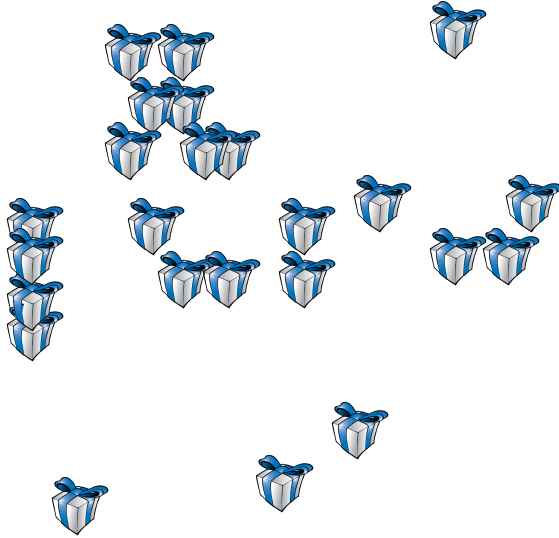
Counting Christmas Objects (B)

Name: _____


Date: _____

Count how many objects there are in each group.


1. There are _____ presents in the group below.




2. There are _____ Christmas trees in the group below.



3. There are _____ bows in the group below.



4. There are _____ baubles in the group below.



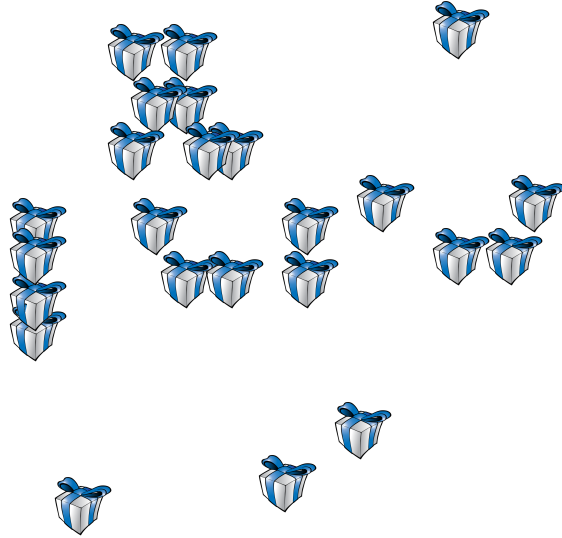
Counting Christmas Objects (B) Answers

Name: _____


Date: _____

Count how many objects there are in each group.


1. There are 24 presents in the group below.




2. There are 56 Christmas trees in the group below.



3. There are 9 bows in the group below.



4. There are 7 baubles in the group below.




Counting Christmas Objects (C)

Name: _____

Date: _____

Count how many objects there are in each group.


1. There are _____ Christmas trees in the group below.



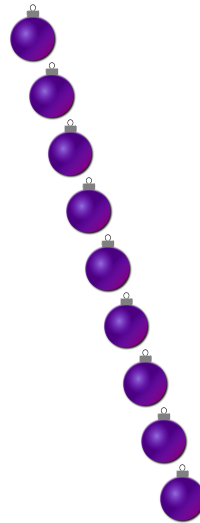
2. There are _____ presents in the group below.



3. There are _____ bows in the group below.



4. There are _____ baubles in the group below.




Counting Christmas Objects (C) Answers

Name: _____

Date: _____

Count how many objects there are in each group.


1. There are 8 Christmas trees in the group below.



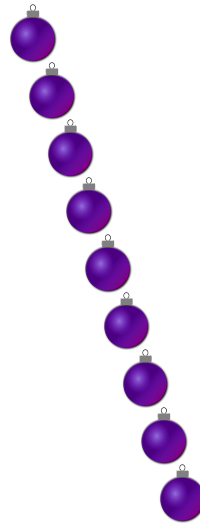
2. There are 27 presents in the group below.



3. There are 38 bows in the group below.



4. There are 9 baubles in the group below.



Counting Christmas Objects (D)

Name: _____


Date: _____

Count how many objects there are in each group.


1. There are _____ Christmas trees in the group below.



2. There are _____ presents in the group below.



3. There are _____ baubles in the group below.



4. There are _____ bows in the group below.



Counting Christmas Objects (D) Answers

Name: _____


Date: _____

Count how many objects there are in each group.


1. There are 5 Christmas trees in the group below.



2. There are 12 presents in the group below.



3. There are 36 baubles in the group below.



4. There are 30 bows in the group below.



Counting Christmas Objects (E)

Name: _____


Date: _____

Count how many objects there are in each group.


1. There are _____ Christmas trees in the group below.




2. There are _____ presents in the group below.



3. There are _____ bows in the group below.



4. There are _____ baubles in the group below.



Counting Christmas Objects (E) Answers

Name: _____


Date: _____

Count how many objects there are in each group.


1. There are 3 Christmas trees in the group below.




2. There are 22 presents in the group below.



3. There are 8 bows in the group below.



4. There are 16 baubles in the group below.




Counting Christmas Objects (F)

Name: _____

Date: _____

Count how many objects there are in each group.


1. There are _____ Christmas trees in the group below.



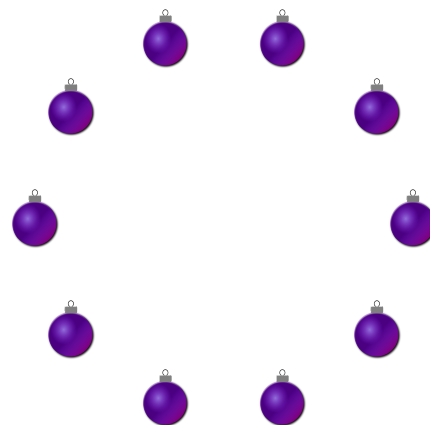
2. There are _____ presents in the group below.



3. There are _____ bows in the group below.



4. There are _____ baubles in the group below.




Counting Christmas Objects (F) Answers

Name: _____

Date: _____

Count how many objects there are in each group.


1. There are 15 Christmas trees in the group below.



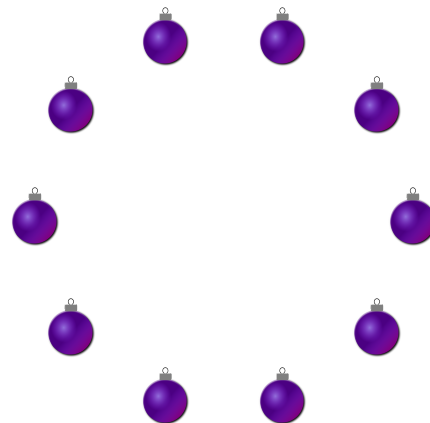
2. There are 3 presents in the group below.



3. There are 37 bows in the group below.



4. There are 10 baubles in the group below.




Counting Christmas Objects (6)

Name: _____

Date: _____

Count how many objects there are in each group.


1. There are _____ Christmas trees in the group below.




2. There are _____ baubles in the group below.



3. There are _____ bows in the group below.



4. There are _____ presents in the group below.




Counting Christmas Objects (G) Answers

Name: _____


Date: _____

Count how many objects there are in each group.


1. There are 7 Christmas trees in the group below.




2. There are 11 baubles in the group below.



3. There are 32 bows in the group below.



4. There are 40 presents in the group below.



Counting Christmas Objects (H)

Name: _____


Date: _____

Count how many objects there are in each group.


1. There are _____ Christmas trees in the group below.



2. There are _____ baubles in the group below.



3. There are _____ bows in the group below.



4. There are _____ presents in the group below.



Counting Christmas Objects (H) Answers

Name: _____


Date: _____

Count how many objects there are in each group.


1. There are 7 Christmas trees in the group below.




2. There are 7 baubles in the group below.



3. There are 40 bows in the group below.



4. There are 45 presents in the group below.




Counting Christmas Objects (I)

Name: _____


Date: _____

Count how many objects there are in each group.


1. There are _____ baubles in the group below.



2. There are _____ presents in the group below.



3. There are _____ bows in the group below.



4. There are _____ Christmas trees in the group below.




Counting Christmas Objects (I) Answers

Name: _____


Date: _____

Count how many objects there are in each group.


1. There are 20 baubles in the group below.



2. There are 14 presents in the group below.



3. There are 41 bows in the group below.



4. There are 3 Christmas trees in the group below.




Counting Christmas Objects (J)

Name: _____

Date: _____

Count how many objects there are in each group.

1. There are _____ baubles in the group below.




2. There are _____ Christmas trees in the group below.



3. There are _____ presents in the group below.



4. There are _____ bows in the group below.




Counting Christmas Objects (J) Answers

Name: _____

Date: _____

Count how many objects there are in each group.

1. There are 38 baubles in the group below.



2. There are 7 Christmas trees in the group below.



3. There are 9 presents in the group below.



4. There are 14 bows in the group below.

