


# Counting Christmas Objects (I)

Name: \_\_\_\_\_

Date: \_\_\_\_\_

Count how many objects there are in each group.

1. There are \_\_\_\_\_ bows in the group below.




2. There are \_\_\_\_\_ presents in the group below.



3. There are \_\_\_\_\_ Christmas trees in the group below.



4. There are \_\_\_\_\_ baubles in the group below.




# Counting Christmas Objects (I) Answers

Name: \_\_\_\_\_

Date: \_\_\_\_\_

Count how many objects there are in each group.

1. There are 12 bows in the group below.



2. There are 12 presents in the group below.



3. There are 4 Christmas trees in the group below.



4. There are 25 baubles in the group below.

