


# Counting Christmas Objects (A)

Name: \_\_\_\_\_

Date: \_\_\_\_\_

Count how many objects there are in each group.

1. There are \_\_\_\_\_ Christmas trees in the group below.



2. There are \_\_\_\_\_ presents in the group below.



3. There are \_\_\_\_\_ bows in the group below.



4. There are \_\_\_\_\_ baubles in the group below.




# Counting Christmas Objects (A) Answers

Name: \_\_\_\_\_

Date: \_\_\_\_\_

Count how many objects there are in each group.

1. There are 12 Christmas trees in the group below.



2. There are 10 presents in the group below.



3. There are 15 bows in the group below.



4. There are 8 baubles in the group below.



# Counting Christmas Objects (B)

Name: \_\_\_\_\_

Date: \_\_\_\_\_

Count how many objects there are in each group.

1. There are \_\_\_\_\_ Christmas trees in the group below.



2. There are \_\_\_\_\_ bows in the group below.



3. There are \_\_\_\_\_ baubles in the group below.



4. There are \_\_\_\_\_ presents in the group below.




# Counting Christmas Objects (B) Answers

Name: \_\_\_\_\_

Date: \_\_\_\_\_

Count how many objects there are in each group.

1. There are 12 Christmas trees in the group below.



2. There are 12 bows in the group below.



3. There are 10 baubles in the group below.



4. There are 10 presents in the group below.



# Counting Christmas Objects (C)

Name: \_\_\_\_\_


Date: \_\_\_\_\_

Count how many objects there are in each group.

1. There are \_\_\_\_\_ baubles in the group below.



2. There are \_\_\_\_\_ Christmas trees in the group below.



3. There are \_\_\_\_\_ presents in the group below.



4. There are \_\_\_\_\_ bows in the group below.



# Counting Christmas Objects (C) Answers

Name: \_\_\_\_\_


Date: \_\_\_\_\_

Count how many objects there are in each group.

1. There are 6 baubles in the group below.



2. There are 20 Christmas trees in the group below.



3. There are 12 presents in the group below.



4. There are 10 bows in the group below.




# Counting Christmas Objects (D)

Name: \_\_\_\_\_


Date: \_\_\_\_\_

Count how many objects there are in each group.

1. There are \_\_\_\_\_ Christmas trees in the group below.



2. There are \_\_\_\_\_ bows in the group below.



3. There are \_\_\_\_\_ baubles in the group below.



4. There are \_\_\_\_\_ presents in the group below.




# Counting Christmas Objects (D) Answers

Name: \_\_\_\_\_


Date: \_\_\_\_\_

Count how many objects there are in each group.

1. There are 12 Christmas trees in the group below.



2. There are 10 bows in the group below.



3. There are 8 baubles in the group below.



4. There are 15 presents in the group below.





# Counting Christmas Objects (E)

Name: \_\_\_\_\_

Date: \_\_\_\_\_

Count how many objects there are in each group.


1. There are \_\_\_\_\_ Christmas trees in the group below.



2. There are \_\_\_\_\_ presents in the group below.



3. There are \_\_\_\_\_ baubles in the group below.



4. There are \_\_\_\_\_ bows in the group below.



# Counting Christmas Objects (E) Answers

Name: \_\_\_\_\_

Date: \_\_\_\_\_

Count how many objects there are in each group.


1. There are 6 Christmas trees in the group below.



2. There are 6 presents in the group below.



3. There are 20 baubles in the group below.



4. There are 20 bows in the group below.



# Counting Christmas Objects (F)

Name: \_\_\_\_\_


Date: \_\_\_\_\_

Count how many objects there are in each group.

1. There are \_\_\_\_\_ bows in the group below.




2. There are \_\_\_\_\_ Christmas trees in the group below.



3. There are \_\_\_\_\_ presents in the group below.



4. There are \_\_\_\_\_ baubles in the group below.



# Counting Christmas Objects (F) Answers

Name: \_\_\_\_\_


Date: \_\_\_\_\_

Count how many objects there are in each group.

1. There are 8 bows in the group below.



2. There are 25 Christmas trees in the group below.



3. There are 12 presents in the group below.



4. There are 6 baubles in the group below.




# Counting Christmas Objects (6)

Name: \_\_\_\_\_


Date: \_\_\_\_\_

Count how many objects there are in each group.

1. There are \_\_\_\_\_ baubles in the group below.



2. There are \_\_\_\_\_ bows in the group below.



3. There are \_\_\_\_\_ Christmas trees in the group below.



4. There are \_\_\_\_\_ presents in the group below.




# Counting Christmas Objects (G) Answers

Name: \_\_\_\_\_


Date: \_\_\_\_\_

Count how many objects there are in each group.

1. There are 15 baubles in the group below.



2. There are 16 bows in the group below.



3. There are 4 Christmas trees in the group below.



4. There are 15 presents in the group below.



# Counting Christmas Objects (H)

Name: \_\_\_\_\_


Date: \_\_\_\_\_

Count how many objects there are in each group.

1. There are \_\_\_\_\_ bows in the group below.



2. There are \_\_\_\_\_ Christmas trees in the group below.



3. There are \_\_\_\_\_ baubles in the group below.



4. There are \_\_\_\_\_ presents in the group below.



# Counting Christmas Objects (H) Answers

Name: \_\_\_\_\_


Date: \_\_\_\_\_

Count how many objects there are in each group.

1. There are 9 bows in the group below.



2. There are 20 Christmas trees in the group below.



3. There are 8 baubles in the group below.



4. There are 10 presents in the group below.






# Counting Christmas Objects (I)

Name: \_\_\_\_\_

Date: \_\_\_\_\_

Count how many objects there are in each group.

1. There are \_\_\_\_\_ bows in the group below.




2. There are \_\_\_\_\_ presents in the group below.



3. There are \_\_\_\_\_ Christmas trees in the group below.



4. There are \_\_\_\_\_ baubles in the group below.




# Counting Christmas Objects (I) Answers

Name: \_\_\_\_\_

Date: \_\_\_\_\_

Count how many objects there are in each group.

1. There are 12 bows in the group below.




2. There are 12 presents in the group below.



3. There are 4 Christmas trees in the group below.



4. There are 25 baubles in the group below.



# Counting Christmas Objects (J)

Name: \_\_\_\_\_


Date: \_\_\_\_\_

Count how many objects there are in each group.

1. There are \_\_\_\_\_ bows in the group below.



2. There are \_\_\_\_\_ baubles in the group below.



3. There are \_\_\_\_\_ Christmas trees in the group below.



4. There are \_\_\_\_\_ presents in the group below.



# Counting Christmas Objects (J) Answers

Name: \_\_\_\_\_


Date: \_\_\_\_\_

Count how many objects there are in each group.

1. There are 16 bows in the group below.



2. There are 10 baubles in the group below.



3. There are 10 Christmas trees in the group below.



4. There are 9 presents in the group below.

