

Counting Christmas Objects (B)

Name: _____


Date: _____

Count how many objects there are in each group.


1. There are _____ presents in the group below.




2. There are _____ baubles in the group below.



3. There are _____ Christmas trees in the group below.



4. There are _____ bows in the group below.



Counting Christmas Objects (B) Answers

Name: _____


Date: _____

Count how many objects there are in each group.


1. There are 18 presents in the group below.



2. There are 45 baubles in the group below.



3. There are 18 Christmas trees in the group below.



4. There are 16 bows in the group below.

