


Counting Christmas Objects (J)

Name: _____


Date: _____

Count how many objects there are in each group.


1. There are _____ Christmas trees in the group below.



2. There are _____ bows in the group below.



3. There are _____ baubles in the group below.



4. There are _____ presents in the group below.




Counting Christmas Objects (J) Answers

Name: _____


Date: _____

Count how many objects there are in each group.


1. There are 24 Christmas trees in the group below.



2. There are 12 bows in the group below.



3. There are 25 baubles in the group below.



4. There are 56 presents in the group below.

