


Counting Christmas Objects (A)

Name: _____


Date: _____

Count how many objects there are in each group.


1. There are _____ baubles in the group below.



2. There are _____ bows in the group below.



3. There are _____ presents in the group below.



4. There are _____ Christmas trees in the group below.




Counting Christmas Objects (A) Answers

Name: _____


Date: _____

Count how many objects there are in each group.


1. There are 42 baubles in the group below.




2. There are 20 bows in the group below.



3. There are 40 presents in the group below.



4. There are 27 Christmas trees in the group below.



Counting Christmas Objects (B)

Name: _____


Date: _____

Count how many objects there are in each group.


1. There are _____ presents in the group below.




2. There are _____ baubles in the group below.



3. There are _____ Christmas trees in the group below.



4. There are _____ bows in the group below.



Counting Christmas Objects (B) Answers

Name: _____


Date: _____

Count how many objects there are in each group.


1. There are 18 presents in the group below.




2. There are 45 baubles in the group below.



3. There are 18 Christmas trees in the group below.



4. There are 16 bows in the group below.



Counting Christmas Objects (C)

Name: _____

Date: _____

Count how many objects there are in each group.


1. There are _____ baubles in the group below.




2. There are _____ bows in the group below.



3. There are _____ Christmas trees in the group below.



4. There are _____ presents in the group below.




Counting Christmas Objects (C) Answers

Name: _____

Date: _____

Count how many objects there are in each group.


1. There are 10 baubles in the group below.




2. There are 18 bows in the group below.



3. There are 56 Christmas trees in the group below.



4. There are 56 presents in the group below.




Counting Christmas Objects (D)

Name: _____

Date: _____

Count how many objects there are in each group.


1. There are _____ bows in the group below.



2. There are _____ baubles in the group below.



3. There are _____ Christmas trees in the group below.



4. There are _____ presents in the group below.



Counting Christmas Objects (D) Answers

Name: _____

Date: _____

Count how many objects there are in each group.


1. There are 24 bows in the group below.



2. There are 16 baubles in the group below.



3. There are 81 Christmas trees in the group below.



4. There are 9 presents in the group below.




Counting Christmas Objects (E)

Name: _____


Date: _____

Count how many objects there are in each group.

1. There are _____ bows in the group below.



2. There are _____ baubles in the group below.



3. There are _____ Christmas trees in the group below.



4. There are _____ presents in the group below.



Counting Christmas Objects (E) Answers

Name: _____


Date: _____

Count how many objects there are in each group.

1. There are 12 bows in the group below.



2. There are 36 baubles in the group below.



3. There are 12 Christmas trees in the group below.



4. There are 21 presents in the group below.



Counting Christmas Objects (F)

Name: _____


Date: _____

Count how many objects there are in each group.


1. There are _____ presents in the group below.




2. There are _____ baubles in the group below.



3. There are _____ bows in the group below.



4. There are _____ Christmas trees in the group below.



Counting Christmas Objects (F) Answers

Name: _____


Date: _____

Count how many objects there are in each group.

1. There are 14 presents in the group below.




2. There are 24 baubles in the group below.



3. There are 35 bows in the group below.



4. There are 45 Christmas trees in the group below.




Counting Christmas Objects (6)

Name: _____

Date: _____

Count how many objects there are in each group.


1. There are _____ baubles in the group below.




2. There are _____ bows in the group below.



3. There are _____ Christmas trees in the group below.



4. There are _____ presents in the group below.




Counting Christmas Objects (G) Answers

Name: _____

Date: _____

Count how many objects there are in each group.


1. There are 36 baubles in the group below.




2. There are 14 bows in the group below.



3. There are 54 Christmas trees in the group below.



4. There are 56 presents in the group below.




Counting Christmas Objects (H)

Name: _____

Date: _____

Count how many objects there are in each group.


1. There are _____ bows in the group below.




2. There are _____ presents in the group below.



3. There are _____ Christmas trees in the group below.



4. There are _____ baubles in the group below.



Counting Christmas Objects (H) Answers

Name: _____

Date: _____

Count how many objects there are in each group.


1. There are 36 bows in the group below.




2. There are 6 presents in the group below.



3. There are 12 Christmas trees in the group below.



4. There are 64 baubles in the group below.




Counting Christmas Objects (I)

Name: _____

Date: _____

Count how many objects there are in each group.

1. There are _____ bows in the group below.




2. There are _____ presents in the group below.



3. There are _____ baubles in the group below.



4. There are _____ Christmas trees in the group below.




Counting Christmas Objects (I) Answers

Name: _____

Date: _____

Count how many objects there are in each group.

1. There are 12 bows in the group below.




2. There are 18 presents in the group below.



3. There are 12 baubles in the group below.



4. There are 36 Christmas trees in the group below.




Counting Christmas Objects (J)

Name: _____


Date: _____

Count how many objects there are in each group.


1. There are _____ Christmas trees in the group below.




2. There are _____ bows in the group below.



3. There are _____ baubles in the group below.



4. There are _____ presents in the group below.




Counting Christmas Objects (J) Answers

Name: _____


Date: _____

Count how many objects there are in each group.


1. There are 24 Christmas trees in the group below.



2. There are 12 bows in the group below.



3. There are 25 baubles in the group below.



4. There are 56 presents in the group below.

