

Elves Number Patterns C

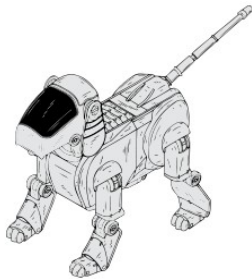


Instructions: Elves generally make the same toy the same number of times in a day. They keep a running total of the number of toys they've made. Continue the pattern to show the next three days totals.



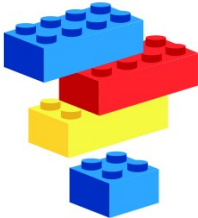
7, 14, 21, 28, _____, _____, _____.

Number of toys per day: _____



60, 67, 74, 81, _____, _____, _____.

Number of toys per day: _____



55, 57, 59, 61, _____, _____, _____.

Number of toys per day: _____



3, 10, 17, 24, _____, _____, _____.

Number of toys per day: _____



6, 11, 16, 21, _____, _____, _____.

Number of toys per day: _____



10, 13, 16, 19, _____, _____, _____.

Number of toys per day: _____



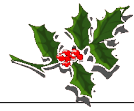
20, 27, 34, 41, _____, _____, _____.

Number of toys per day: _____





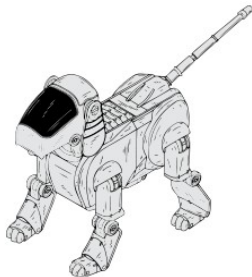
Elves Number Patterns & Answers



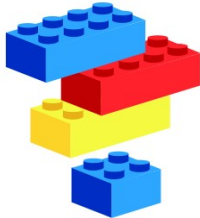
Instructions: Elves generally make the same toy the same number of times in a day. They keep a running total of the number of toys they've made. Continue the pattern to show the next three days totals.



7, 14, 21, 28, _____, _____, _____.
Number of toys per day: 7



60, 67, 74, 81, _____, _____, _____.
Number of toys per day: 7



55, 57, 59, 61, _____, _____, _____.
Number of toys per day: 2



3, 10, 17, 24, _____, _____, _____.
Number of toys per day: 7



6, 11, 16, 21, _____, _____, _____.
Number of toys per day: 5



10, 13, 16, 19, _____, _____, _____.
Number of toys per day: 3



20, 27, 34, 41, _____, _____, _____.
Number of toys per day: 7

