

Elves Number Patterns D

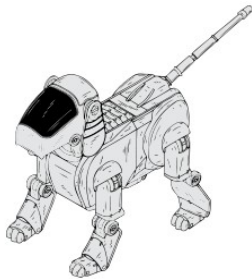


Instructions: Elves generally make the same toy the same number of times in a day. They keep a running total of the number of toys they've made. Continue the pattern to show the next three days totals.



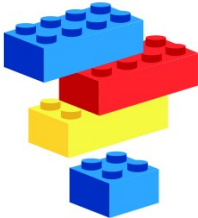
63, 67, 71, 75, _____, _____, _____.

Number of toys per day: _____



56, 60, 64, 68, _____, _____, _____.

Number of toys per day: _____



55, 62, 69, 76, _____, _____, _____.

Number of toys per day: _____



20, 26, 32, 38, _____, _____, _____.

Number of toys per day: _____



53, 60, 67, 74, _____, _____, _____.

Number of toys per day: _____



6, 9, 12, 15, _____, _____, _____.

Number of toys per day: _____



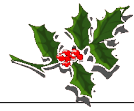
58, 59, 60, 61, _____, _____, _____.

Number of toys per day: _____





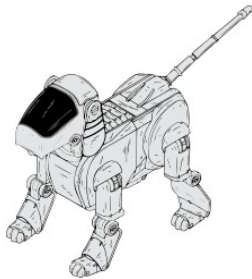
Elves Number Patterns D Answers



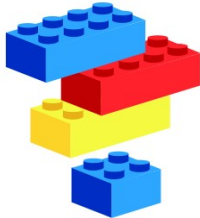
Instructions: Elves generally make the same toy the same number of times in a day. They keep a running total of the number of toys they've made. Continue the pattern to show the next three days totals.



63, 67, 71, 75, _____, _____, _____.
Number of toys per day: 4



56, 60, 64, 68, _____, _____, _____.
Number of toys per day: 4



55, 62, 69, 76, _____, _____, _____.
Number of toys per day: 7



20, 26, 32, 38, _____, _____, _____.
Number of toys per day: 6



53, 60, 67, 74, _____, _____, _____.
Number of toys per day: 7



6, 9, 12, 15, _____, _____, _____.
Number of toys per day: 3



58, 59, 60, 61, _____, _____, _____.
Number of toys per day: 1

