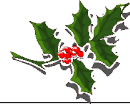


Elves Number Patterns E

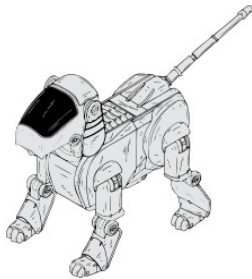


Instructions: Elves generally make the same toy the same number of times in a day. They keep a running total of the number of toys they've made. Continue the pattern to show the next three days totals.



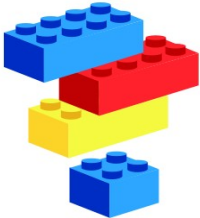
20, 24, 28, 32, _____, _____, _____.

Number of toys per day: _____



60, 67, 74, 81, _____, _____, _____.

Number of toys per day: _____



65, 66, 67, 68, _____, _____, _____.

Number of toys per day: _____



55, 60, 65, 70, _____, _____, _____.

Number of toys per day: _____



13, 16, 19, 22, _____, _____, _____.

Number of toys per day: _____



5, 11, 17, 23, _____, _____, _____.

Number of toys per day: _____



1, 8, 15, 22, _____, _____, _____.

Number of toys per day: _____





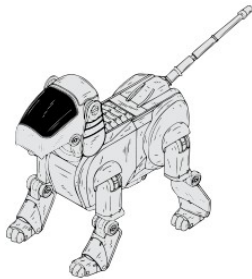
Elves Number Patterns & Answers



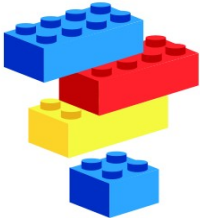
Instructions: Elves generally make the same toy the same number of times in a day. They keep a running total of the number of toys they've made. Continue the pattern to show the next three days totals.



20, 24, 28, 32, _____, _____, _____.
Number of toys per day: 4



60, 67, 74, 81, _____, _____, _____.
Number of toys per day: 7



65, 66, 67, 68, _____, _____, _____.
Number of toys per day: 1



55, 60, 65, 70, _____, _____, _____.
Number of toys per day: 5



13, 16, 19, 22, _____, _____, _____.
Number of toys per day: 3



5, 11, 17, 23, _____, _____, _____.
Number of toys per day: 6



1, 8, 15, 22, _____, _____, _____.
Number of toys per day: 7

