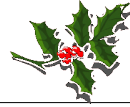


# Elves Number Patterns F

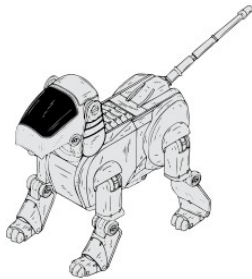


Instructions: Elves generally make the same toy the same number of times in a day. They keep a running total of the number of toys they've made. Continue the pattern to show the next three days totals.



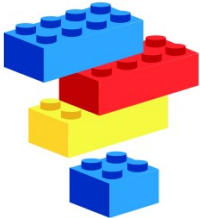
5, 9, 13, 17, \_\_\_\_\_, \_\_\_\_\_, \_\_\_\_\_.

Number of toys per day: \_\_\_\_\_



17, 23, 29, 35, \_\_\_\_\_, \_\_\_\_\_, \_\_\_\_\_.

Number of toys per day: \_\_\_\_\_



68, 74, 80, 86, \_\_\_\_\_, \_\_\_\_\_, \_\_\_\_\_.

Number of toys per day: \_\_\_\_\_



11, 15, 19, 23, \_\_\_\_\_, \_\_\_\_\_, \_\_\_\_\_.

Number of toys per day: \_\_\_\_\_



19, 24, 29, 34, \_\_\_\_\_, \_\_\_\_\_, \_\_\_\_\_.

Number of toys per day: \_\_\_\_\_



51, 54, 57, 60, \_\_\_\_\_, \_\_\_\_\_, \_\_\_\_\_.

Number of toys per day: \_\_\_\_\_



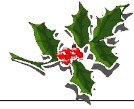
2, 3, 4, 5, \_\_\_\_\_, \_\_\_\_\_, \_\_\_\_\_.

Number of toys per day: \_\_\_\_\_





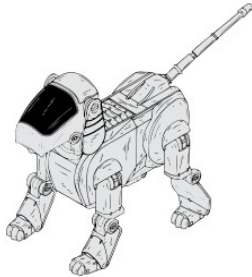
# Elves Number Patterns & Answers



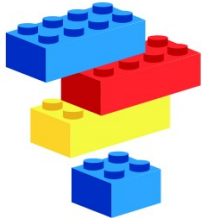
Instructions: Elves generally make the same toy the same number of times in a day. They keep a running total of the number of toys they've made. Continue the pattern to show the next three days totals.



5, 9, 13, 17, \_\_\_\_\_, \_\_\_\_\_, \_\_\_\_\_.  
Number of toys per day: 4



17, 23, 29, 35, \_\_\_\_\_, \_\_\_\_\_, \_\_\_\_\_.  
Number of toys per day: 6



68, 74, 80, 86, \_\_\_\_\_, \_\_\_\_\_, \_\_\_\_\_.  
Number of toys per day: 6



11, 15, 19, 23, \_\_\_\_\_, \_\_\_\_\_, \_\_\_\_\_.  
Number of toys per day: 4



19, 24, 29, 34, \_\_\_\_\_, \_\_\_\_\_, \_\_\_\_\_.  
Number of toys per day: 5



51, 54, 57, 60, \_\_\_\_\_, \_\_\_\_\_, \_\_\_\_\_.  
Number of toys per day: 3



2, 3, 4, 5, \_\_\_\_\_, \_\_\_\_\_, \_\_\_\_\_.  
Number of toys per day: 1

