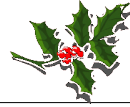


Elves Number Patterns H

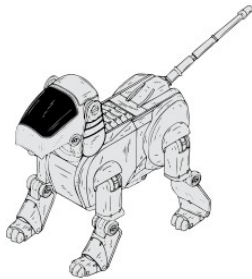


Instructions: Elves generally make the same toy the same number of times in a day. They keep a running total of the number of toys they've made. Continue the pattern to show the next three days totals.



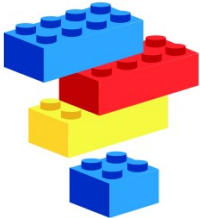
69, 74, 79, 84, _____, _____, _____.

Number of toys per day: _____



71, 79, 87, 95, _____, _____, _____.

Number of toys per day: _____



11, 13, 15, 17, _____, _____, _____.

Number of toys per day: _____



17, 20, 23, 26, _____, _____, _____.

Number of toys per day: _____



6, 11, 16, 21, _____, _____, _____.

Number of toys per day: _____



55, 63, 71, 79, _____, _____, _____.

Number of toys per day: _____



3, 10, 17, 24, _____, _____, _____.

Number of toys per day: _____





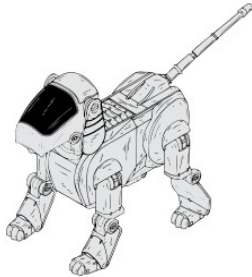
Elves Number Patterns & Answers



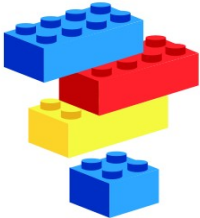
Instructions: Elves generally make the same toy the same number of times in a day. They keep a running total of the number of toys they've made. Continue the pattern to show the next three days totals.



69, 74, 79, 84, _____, _____, _____.
Number of toys per day: 5



71, 79, 87, 95, _____, _____, _____.
Number of toys per day: 8



11, 13, 15, 17, _____, _____, _____.
Number of toys per day: 2



17, 20, 23, 26, _____, _____, _____.
Number of toys per day: 3



6, 11, 16, 21, _____, _____, _____.
Number of toys per day: 5



55, 63, 71, 79, _____, _____, _____.
Number of toys per day: 8



3, 10, 17, 24, _____, _____, _____.
Number of toys per day: 7

