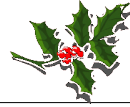


# Elves Number Patterns I

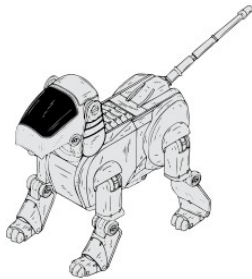


Instructions: Elves generally make the same toy the same number of times in a day. They keep a running total of the number of toys they've made. Continue the pattern to show the next three days totals.



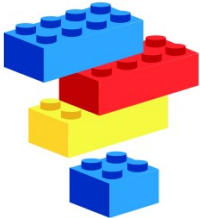
60, 61, 62, 63, \_\_\_\_\_, \_\_\_\_\_, \_\_\_\_\_.

Number of toys per day: \_\_\_\_\_



68, 76, 84, 92, \_\_\_\_\_, \_\_\_\_\_, \_\_\_\_\_.

Number of toys per day: \_\_\_\_\_



53, 57, 61, 65, \_\_\_\_\_, \_\_\_\_\_, \_\_\_\_\_.

Number of toys per day: \_\_\_\_\_



11, 14, 17, 20, \_\_\_\_\_, \_\_\_\_\_, \_\_\_\_\_.

Number of toys per day: \_\_\_\_\_



50, 52, 54, 56, \_\_\_\_\_, \_\_\_\_\_, \_\_\_\_\_.

Number of toys per day: \_\_\_\_\_



3, 8, 13, 18, \_\_\_\_\_, \_\_\_\_\_, \_\_\_\_\_.

Number of toys per day: \_\_\_\_\_



15, 23, 31, 39, \_\_\_\_\_, \_\_\_\_\_, \_\_\_\_\_.

Number of toys per day: \_\_\_\_\_





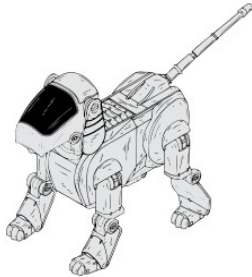
# Elves Number Patterns I Answers



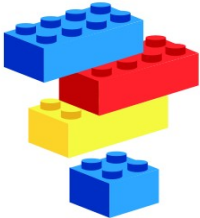
Instructions: Elves generally make the same toy the same number of times in a day. They keep a running total of the number of toys they've made. Continue the pattern to show the next three days totals.



60, 61, 62, 63, \_\_\_\_\_, \_\_\_\_\_, \_\_\_\_\_.  
Number of toys per day: 1



68, 76, 84, 92, \_\_\_\_\_, \_\_\_\_\_, \_\_\_\_\_.  
Number of toys per day: 8



53, 57, 61, 65, \_\_\_\_\_, \_\_\_\_\_, \_\_\_\_\_.  
Number of toys per day: 4



11, 14, 17, 20, \_\_\_\_\_, \_\_\_\_\_, \_\_\_\_\_.  
Number of toys per day: 3



50, 52, 54, 56, \_\_\_\_\_, \_\_\_\_\_, \_\_\_\_\_.  
Number of toys per day: 2



3, 8, 13, 18, \_\_\_\_\_, \_\_\_\_\_, \_\_\_\_\_.  
Number of toys per day: 5



15, 23, 31, 39, \_\_\_\_\_, \_\_\_\_\_, \_\_\_\_\_.  
Number of toys per day: 8

