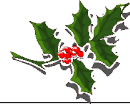


Elves Number Patterns J

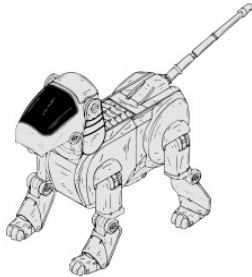


Instructions: Elves generally make the same toy the same number of times in a day. They keep a running total of the number of toys they've made. Continue the pattern to show the next three days totals.



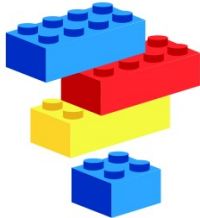
72, 74, 76, 78, _____, _____, _____.

Number of toys per day: _____



52, 56, 60, 64, _____, _____, _____.

Number of toys per day: _____



66, 67, 68, 69, _____, _____, _____.

Number of toys per day: _____



54, 55, 56, 57, _____, _____, _____.

Number of toys per day: _____



15, 20, 25, 30, _____, _____, _____.

Number of toys per day: _____



2, 10, 18, 26, _____, _____, _____.

Number of toys per day: _____



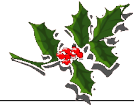
7, 8, 9, 10, _____, _____, _____.

Number of toys per day: _____





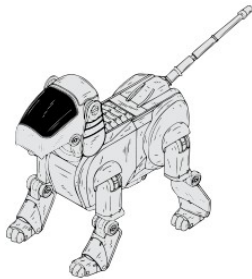
Elves Number Patterns Answers



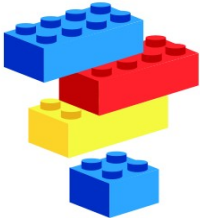
Instructions: Elves generally make the same toy the same number of times in a day. They keep a running total of the number of toys they've made. Continue the pattern to show the next three days totals.



72, 74, 76, 78, _____, _____, _____.
Number of toys per day: 2



52, 56, 60, 64, _____, _____, _____.
Number of toys per day: 4



66, 67, 68, 69, _____, _____, _____.
Number of toys per day: 1



54, 55, 56, 57, _____, _____, _____.
Number of toys per day: 1



15, 20, 25, 30, _____, _____, _____.
Number of toys per day: 5



2, 10, 18, 26, _____, _____, _____.
Number of toys per day: 8



7, 8, 9, 10, _____, _____, _____.
Number of toys per day: 1

