


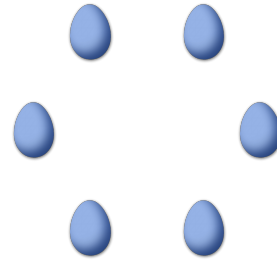
COUNTING EASTER EGGS (A)

Count how many Easter eggs there are in each group.


1. There are _____ Easter eggs in the group below.




2. There are _____ Easter eggs in the group below.




3. There are _____ Easter eggs in the group below.




4. There are _____ Easter eggs in the group below.



5. There are _____ Easter eggs in the group below.




6. There are _____ Easter eggs in the group below.



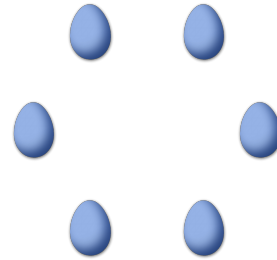
COUNTING EASTER EGGS (A) ANSWERS

Count how many Easter eggs there are in each group.


1. There are 7 Easter eggs in the group below.




2. There are 6 Easter eggs in the group below.




3. There are 12 Easter eggs in the group below.



4. There are 15 Easter eggs in the group below.



5. There are 9 Easter eggs in the group below.



6. There are 5 Easter eggs in the group below.

