



# COUNTING EASTER EGGS (F)

Count how many Easter eggs there are in each group.


1. There are \_\_\_\_\_ Easter eggs in the group below.




2. There are \_\_\_\_\_ Easter eggs in the group below.



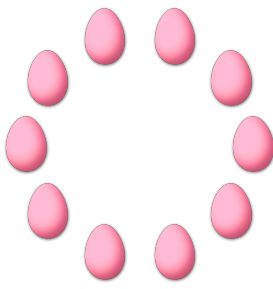
3. There are \_\_\_\_\_ Easter eggs in the group below.




4. There are \_\_\_\_\_ Easter eggs in the group below.



5. There are \_\_\_\_\_ Easter eggs in the group below.




6. There are \_\_\_\_\_ Easter eggs in the group below.




# COUNTING EASTER EGGS (F) ANSWERS

Count how many Easter eggs there are in each group.


1. There are 11 Easter eggs in the group below.




2. There are 15 Easter eggs in the group below.



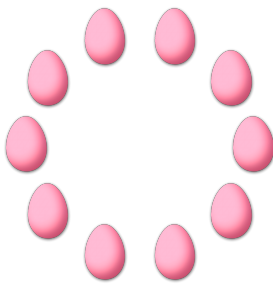
3. There are 12 Easter eggs in the group below.



4. There are 14 Easter eggs in the group below.



5. There are 10 Easter eggs in the group below.



6. There are 9 Easter eggs in the group below.

