

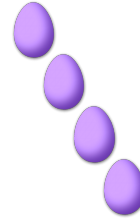
COUNTING EASTER EGGS (C)

Count how many Easter eggs there are in each group.

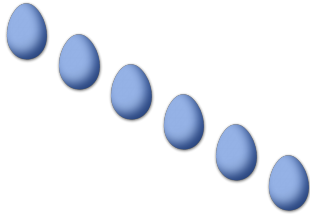
1. There are _____ Easter eggs in the group below.




2. There are _____ Easter eggs in the group below.




3. There are _____ Easter eggs in the group below.



4. There are _____ Easter eggs in the group below.



5. There are _____ Easter eggs in the group below.



6. There are _____ Easter eggs in the group below.

