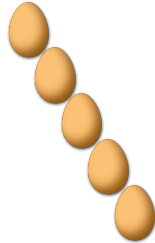


COUNTING EASTER EGGS (H)

Count how many Easter eggs there are in each group.

1. There are ____ Easter eggs in the group below.



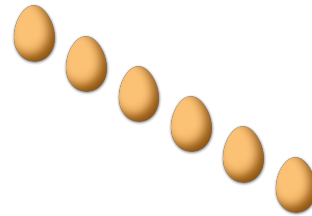
2. There are ____ Easter eggs in the group below.



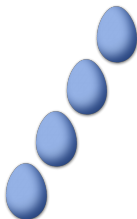
3. There are ____ Easter eggs in the group below.




4. There are ____ Easter eggs in the group below.



5. There are ____ Easter eggs in the group below.



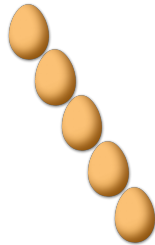
6. There are ____ Easter eggs in the group below.



COUNTING EASTER EGGS (H) ANSWERS

Count how many Easter eggs there are in each group.

1. There are 5 Easter eggs in the group below.




2. There are 2 Easter eggs in the group below.



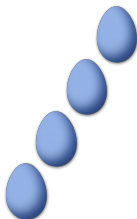
3. There are 7 Easter eggs in the group below.



4. There are 6 Easter eggs in the group below.



5. There are 4 Easter eggs in the group below.



6. There are 3 Easter eggs in the group below.

