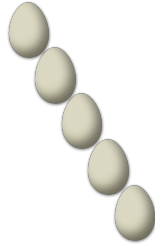



COUNTING EASTER EGGS 10

Count how many Easter eggs there are in each group.

1. There are ____ Easter eggs in the group below.



2. There are ____ Easter eggs in the group below.




3. There are ____ Easter eggs in the group below.



4. There are ____ Easter eggs in the group below.



5. There are ____ Easter eggs in the group below.



6. There are ____ Easter eggs in the group below.

