


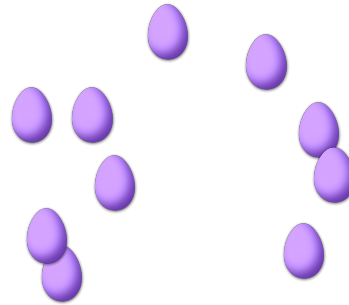
# COUNTING EASTER EGGS (D)

Count how many Easter eggs there are in each group.


1. There are \_\_\_\_\_ Easter eggs in the group below.



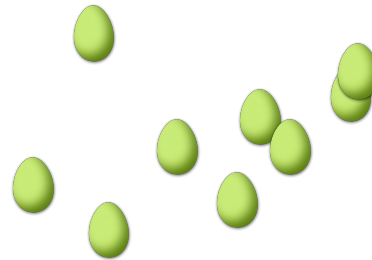
2. There are \_\_\_\_\_ Easter eggs in the group below.



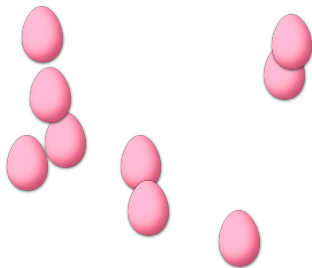
3. There are \_\_\_\_\_ Easter eggs in the group below.



4. There are \_\_\_\_\_ Easter eggs in the group below.



5. There are \_\_\_\_\_ Easter eggs in the group below.



6. There are \_\_\_\_\_ Easter eggs in the group below.

