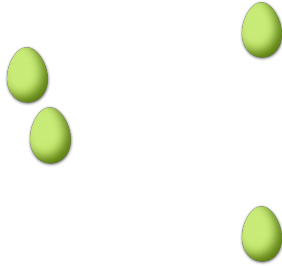


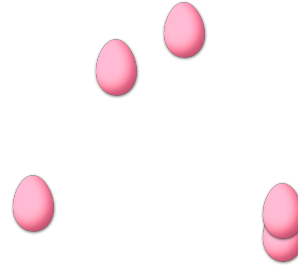
COUNTING EASTER EGGS (1)

Count how many Easter eggs there are in each group.

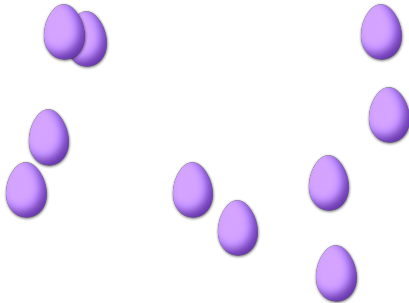
1. There are ____ Easter eggs in the group below.



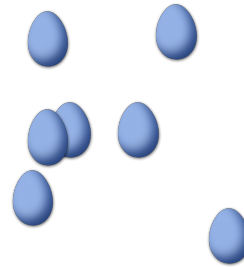
2. There are ____ Easter eggs in the group below.




3. There are ____ Easter eggs in the group below.



4. There are ____ Easter eggs in the group below.



5. There are ____ Easter eggs in the group below.



6. There are ____ Easter eggs in the group below.

