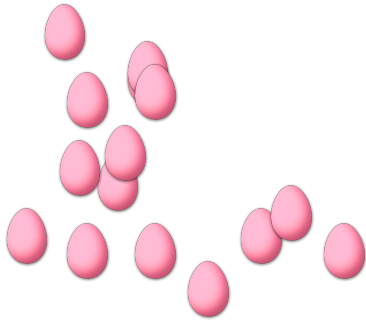



# COUNTING EASTER EGGS (D)

Count how many Easter eggs there are in each group.

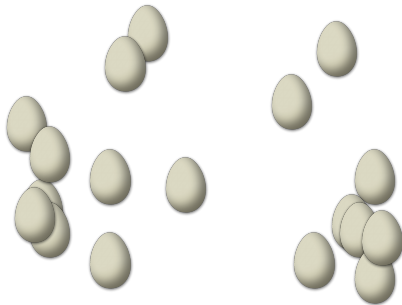
1. There are \_\_\_\_ Easter eggs in the group below.




2. There are \_\_\_\_ Easter eggs in the group below.



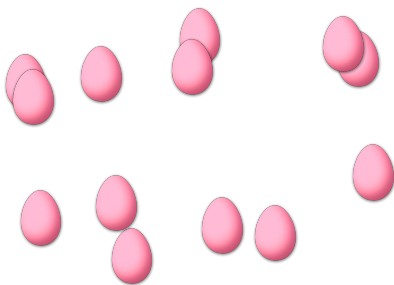
3. There are \_\_\_\_ Easter eggs in the group below.



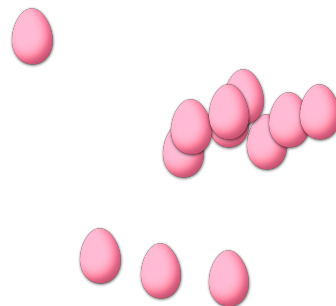
4. There are \_\_\_\_ Easter eggs in the group below.



5. There are \_\_\_\_ Easter eggs in the group below.



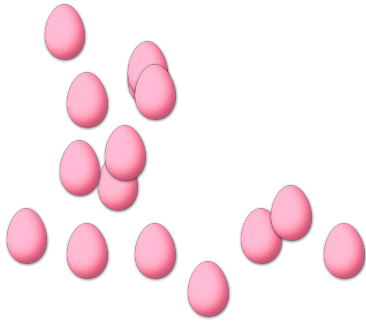
6. There are \_\_\_\_ Easter eggs in the group below.




# COUNTING EASTER EGGS (D) ANSWERS

Count how many Easter eggs there are in each group.

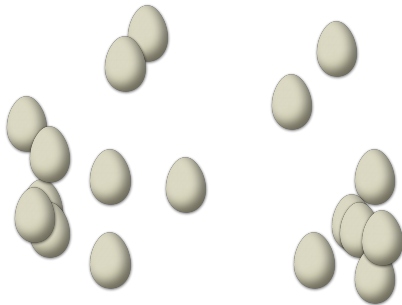
1. There are 15 Easter eggs in the group below.




2. There are 9 Easter eggs in the group below.




3. There are 18 Easter eggs in the group below.



4. There are 16 Easter eggs in the group below.



5. There are 13 Easter eggs in the group below.



6. There are 12 Easter eggs in the group below.

