



















Easter Egg Map (H)

What is the grid reference of each Easter egg?

	A	B	C	D	E	F	G	H	I
1									
2									
3									
4									
5									
6									
7									
8									
9									

How many Easter eggs are there?

How many  Easter eggs are there?

How many blanks are there?

Happy Easter from Math-Drills.Com!

Easter Egg Map (H) Answers

What is the grid reference of each Easter egg?

	A	B	C	D	E	F	G	H	I
1		B1				F1			I1
2					E2	F2			I2
3							G3	H3	
4				D4					
5				D5			G5		I5
6					E6	F6			
7									I7
8		B8		D8				H8	
9									

How many Easter eggs are there?

18

How many  Easter eggs are there?

2

How many blanks are there?

63

Happy Easter from Math-Drills.Com!