

Easter Rabbit Frequencies (B)






Name: _____

Date: _____

Score: _____

Determine the frequency, relative frequency and percentage (one place) of each item.



Item	Frequency	Relative Frequency	Percentage
			
			
			
			
			

Easter Rabbit Frequencies (B) Answers

Name: _____

Date: _____

Score: _____

Determine the frequency, relative frequency and percentage (one place) of each item.



Item	Frequency	Relative Frequency	Percentage
	43	$\frac{43}{180}$	23.9%
	35	$\frac{35}{180} = \frac{7}{36}$	19.4%
	47	$\frac{47}{180}$	26.1%
	24	$\frac{24}{180} = \frac{2}{15}$	13.3%
	31	$\frac{31}{180}$	17.2%