

# Easter Rabbit Frequencies (E)






Name: \_\_\_\_\_

Date: \_\_\_\_\_

Score: \_\_\_\_\_

Determine the frequency, relative frequency and percentage (one place) of each item.



Item	Frequency	Relative Frequency	Percentage
			
			
			
			
			

# Easter Rabbit Frequencies (E) Answers

Name: \_\_\_\_\_

Date: \_\_\_\_\_

Score: \_\_\_\_\_

Determine the frequency, relative frequency and percentage (one place) of each item.



Item	Frequency	Relative Frequency	Percentage
	50	$\frac{50}{180} = \frac{5}{18}$	27.8%
	32	$\frac{32}{180} = \frac{8}{45}$	17.8%
	46	$\frac{46}{180} = \frac{23}{90}$	25.6%
	35	$\frac{35}{180} = \frac{7}{36}$	19.4%
	17	$\frac{17}{180}$	9.4%