

Easter Rabbit Frequencies (F)






Name: _____

Date: _____

Score: _____

Determine the frequency, relative frequency and percentage (one place) of each item.



Item	Frequency	Relative Frequency	Percentage
			
			
			
			
			

Easter Rabbit Frequencies (F) Answers

Name: _____

Date: _____

Score: _____

Determine the frequency, relative frequency and percentage (one place) of each item.



Item	Frequency	Relative Frequency	Percentage
	27	$\frac{27}{180} = \frac{3}{20}$	15%
	39	$\frac{39}{180} = \frac{13}{60}$	21.7%
	28	$\frac{28}{180} = \frac{7}{45}$	15.6%
	37	$\frac{37}{180}$	20.6%
	49	$\frac{49}{180}$	27.2%