


# Easter Eggs in a Basket (B)


Put Easter eggs with sums greater than 99 in the basket.



$$\begin{array}{r} 84 \\ + 30 \\ \hline \end{array}$$



$$\begin{array}{r} 55 \\ + 87 \\ \hline \end{array}$$


$$\begin{array}{r} 47 \\ + 31 \\ \hline \end{array}$$



$$\begin{array}{r} 50 \\ + 31 \\ \hline \end{array}$$


$$\begin{array}{r} 34 \\ + 43 \\ \hline \end{array}$$



$$\begin{array}{r} 72 \\ + 87 \\ \hline \end{array}$$



$$\begin{array}{r} 34 \\ + 62 \\ \hline \end{array}$$



$$\begin{array}{r} 28 \\ + 32 \\ \hline \end{array}$$



$$\begin{array}{r} 78 \\ + 44 \\ \hline \end{array}$$



$$\begin{array}{r} 69 \\ + 13 \\ \hline \end{array}$$


$$\begin{array}{r} 24 \\ + 11 \\ \hline \end{array}$$



$$\begin{array}{r} 27 \\ + 57 \\ \hline \end{array}$$



$$\begin{array}{r} 94 \\ + 91 \\ \hline \end{array}$$



$$\begin{array}{r} 71 \\ + 46 \\ \hline \end{array}$$


$$\begin{array}{r} 89 \\ + 43 \\ \hline \end{array}$$


$$\begin{array}{r} 44 \\ + 90 \\ \hline \end{array}$$


$$\begin{array}{r} 29 \\ + 59 \\ \hline \end{array}$$


$$\begin{array}{r} 19 \\ + 53 \\ \hline \end{array}$$


$$\begin{array}{r} 66 \\ + 14 \\ \hline \end{array}$$


$$\begin{array}{r} 78 \\ + 56 \\ \hline \end{array}$$



How many Easter eggs go in the basket?