



Easter Eggs in a Basket (C)


Put Easter eggs with sums greater than 99 in the basket.



$$\begin{array}{r} 98 \\ + 54 \\ \hline \end{array}$$



$$\begin{array}{r} 10 \\ + 59 \\ \hline \end{array}$$



$$\begin{array}{r} 76 \\ + 18 \\ \hline \end{array}$$



$$\begin{array}{r} 55 \\ + 16 \\ \hline \end{array}$$


$$\begin{array}{r} 69 \\ + 64 \\ \hline \end{array}$$



$$\begin{array}{r} 73 \\ + 56 \\ \hline \end{array}$$



$$\begin{array}{r} 28 \\ + 44 \\ \hline \end{array}$$


$$\begin{array}{r} 21 \\ + 57 \\ \hline \end{array}$$



$$\begin{array}{r} 38 \\ + 39 \\ \hline \end{array}$$


$$\begin{array}{r} 53 \\ + 50 \\ \hline \end{array}$$



$$\begin{array}{r} 42 \\ + 35 \\ \hline \end{array}$$



$$\begin{array}{r} 19 \\ + 97 \\ \hline \end{array}$$



$$\begin{array}{r} 90 \\ + 70 \\ \hline \end{array}$$



$$\begin{array}{r} 95 \\ + 98 \\ \hline \end{array}$$


$$\begin{array}{r} 90 \\ + 86 \\ \hline \end{array}$$


$$\begin{array}{r} 99 \\ + 97 \\ \hline \end{array}$$


$$\begin{array}{r} 61 \\ + 21 \\ \hline \end{array}$$


$$\begin{array}{r} 51 \\ + 22 \\ \hline \end{array}$$


$$\begin{array}{r} 88 \\ + 49 \\ \hline \end{array}$$



$$\begin{array}{r} 43 \\ + 39 \\ \hline \end{array}$$





How many Easter eggs go in the basket?


Easter Eggs in a Basket (C) Answers


Put Easter eggs with sums greater than 99 in the basket.


$$\begin{array}{r} 98 \\ + 54 \\ \hline 152 \end{array}$$



$$\begin{array}{r} 10 \\ + 59 \\ \hline 69 \end{array}$$



$$\begin{array}{r} 76 \\ + 18 \\ \hline 94 \end{array}$$


$$\begin{array}{r} 55 \\ + 16 \\ \hline 71 \end{array}$$



$$\begin{array}{r} 69 \\ + 64 \\ \hline 133 \end{array}$$



$$\begin{array}{r} 73 \\ + 56 \\ \hline 129 \end{array}$$



$$\begin{array}{r} 28 \\ + 44 \\ \hline 72 \end{array}$$



$$\begin{array}{r} 21 \\ + 57 \\ \hline 78 \end{array}$$



$$\begin{array}{r} 38 \\ + 39 \\ \hline 77 \end{array}$$



$$\begin{array}{r} 53 \\ + 50 \\ \hline 103 \end{array}$$



$$\begin{array}{r} 42 \\ + 35 \\ \hline 77 \end{array}$$



$$\begin{array}{r} 19 \\ + 97 \\ \hline 116 \end{array}$$



$$\begin{array}{r} 90 \\ + 70 \\ \hline 160 \end{array}$$


$$\begin{array}{r} 95 \\ + 98 \\ \hline 193 \end{array}$$



$$\begin{array}{r} 90 \\ + 86 \\ \hline 176 \end{array}$$


$$\begin{array}{r} 99 \\ + 97 \\ \hline 196 \end{array}$$


$$\begin{array}{r} 61 \\ + 21 \\ \hline 82 \end{array}$$


$$\begin{array}{r} 51 \\ + 22 \\ \hline 73 \end{array}$$


$$\begin{array}{r} 88 \\ + 49 \\ \hline 137 \end{array}$$


$$\begin{array}{r} 43 \\ + 39 \\ \hline 82 \end{array}$$



How many Easter eggs go in the basket?

10