



Easter Eggs in a Basket (D)

Put Easter eggs with sums greater than 99 in the basket.


$$\begin{array}{r} 64 \\ + 79 \\ \hline \end{array}$$



$$\begin{array}{r} 70 \\ + 98 \\ \hline \end{array}$$



$$\begin{array}{r} 57 \\ + 22 \\ \hline \end{array}$$



$$\begin{array}{r} 57 \\ + 41 \\ \hline \end{array}$$



$$\begin{array}{r} 32 \\ + 75 \\ \hline \end{array}$$


$$\begin{array}{r} 85 \\ + 74 \\ \hline \end{array}$$



$$\begin{array}{r} 97 \\ + 39 \\ \hline \end{array}$$



$$\begin{array}{r} 32 \\ + 23 \\ \hline \end{array}$$



$$\begin{array}{r} 64 \\ + 20 \\ \hline \end{array}$$


$$\begin{array}{r} 24 \\ + 12 \\ \hline \end{array}$$



$$\begin{array}{r} 90 \\ + 69 \\ \hline \end{array}$$



$$\begin{array}{r} 25 \\ + 75 \\ \hline \end{array}$$



$$\begin{array}{r} 74 \\ + 92 \\ \hline \end{array}$$



$$\begin{array}{r} 48 \\ + 94 \\ \hline \end{array}$$



$$\begin{array}{r} 64 \\ + 46 \\ \hline \end{array}$$


$$\begin{array}{r} 78 \\ + 90 \\ \hline \end{array}$$


$$\begin{array}{r} 73 \\ + 83 \\ \hline \end{array}$$


$$\begin{array}{r} 22 \\ + 91 \\ \hline \end{array}$$


$$\begin{array}{r} 78 \\ + 37 \\ \hline \end{array}$$


$$\begin{array}{r} 13 \\ + 43 \\ \hline \end{array}$$



How many Easter eggs go in the basket?