



Easter Eggs in a Basket (E)


Put Easter eggs with sums greater than 99 in the basket.



$$\begin{array}{r} 15 \\ + 44 \\ \hline \end{array}$$



$$\begin{array}{r} 41 \\ + 65 \\ \hline \end{array}$$



$$\begin{array}{r} 84 \\ + 23 \\ \hline \end{array}$$



$$\begin{array}{r} 44 \\ + 43 \\ \hline \end{array}$$



$$\begin{array}{r} 10 \\ + 24 \\ \hline \end{array}$$



$$\begin{array}{r} 64 \\ + 95 \\ \hline \end{array}$$



$$\begin{array}{r} 35 \\ + 93 \\ \hline \end{array}$$


$$\begin{array}{r} 92 \\ + 35 \\ \hline \end{array}$$



$$\begin{array}{r} 55 \\ + 25 \\ \hline \end{array}$$


$$\begin{array}{r} 63 \\ + 83 \\ \hline \end{array}$$



$$\begin{array}{r} 98 \\ + 11 \\ \hline \end{array}$$



$$\begin{array}{r} 32 \\ + 59 \\ \hline \end{array}$$



$$\begin{array}{r} 46 \\ + 40 \\ \hline \end{array}$$



$$\begin{array}{r} 93 \\ + 87 \\ \hline \end{array}$$


$$\begin{array}{r} 67 \\ + 88 \\ \hline \end{array}$$


$$\begin{array}{r} 88 \\ + 62 \\ \hline \end{array}$$


$$\begin{array}{r} 17 \\ + 53 \\ \hline \end{array}$$


$$\begin{array}{r} 13 \\ + 70 \\ \hline \end{array}$$


$$\begin{array}{r} 46 \\ + 23 \\ \hline \end{array}$$


$$\begin{array}{r} 46 \\ + 61 \\ \hline \end{array}$$



How many Easter eggs go in the basket?