




Easter Eggs in a Basket (F)


Put Easter eggs with sums greater than 99 in the basket.



$$\begin{array}{r} 35 \\ + 56 \\ \hline \end{array}$$



$$\begin{array}{r} 49 \\ + 95 \\ \hline \end{array}$$



$$\begin{array}{r} 92 \\ + 64 \\ \hline \end{array}$$



$$\begin{array}{r} 91 \\ + 61 \\ \hline \end{array}$$



$$\begin{array}{r} 22 \\ + 59 \\ \hline \end{array}$$


$$\begin{array}{r} 10 \\ + 82 \\ \hline \end{array}$$



$$\begin{array}{r} 67 \\ + 44 \\ \hline \end{array}$$



$$\begin{array}{r} 99 \\ + 41 \\ \hline \end{array}$$



$$\begin{array}{r} 20 \\ + 72 \\ \hline \end{array}$$


$$\begin{array}{r} 27 \\ + 74 \\ \hline \end{array}$$



$$\begin{array}{r} 26 \\ + 90 \\ \hline \end{array}$$



$$\begin{array}{r} 67 \\ + 88 \\ \hline \end{array}$$



$$\begin{array}{r} 39 \\ + 96 \\ \hline \end{array}$$



$$\begin{array}{r} 96 \\ + 53 \\ \hline \end{array}$$



$$\begin{array}{r} 53 \\ + 92 \\ \hline \end{array}$$


$$\begin{array}{r} 44 \\ + 92 \\ \hline \end{array}$$


$$\begin{array}{r} 23 \\ + 53 \\ \hline \end{array}$$


$$\begin{array}{r} 11 \\ + 45 \\ \hline \end{array}$$


$$\begin{array}{r} 49 \\ + 31 \\ \hline \end{array}$$


$$\begin{array}{r} 93 \\ + 37 \\ \hline \end{array}$$



How many Easter eggs go in the basket?