




# Easter Eggs in a Basket (G)


Put Easter eggs with sums greater than 99 in the basket.



$$\begin{array}{r} 51 \\ + 44 \\ \hline \end{array}$$



$$\begin{array}{r} 61 \\ + 13 \\ \hline \end{array}$$


$$\begin{array}{r} 31 \\ + 14 \\ \hline \end{array}$$



$$\begin{array}{r} 31 \\ + 98 \\ \hline \end{array}$$


$$\begin{array}{r} 34 \\ + 94 \\ \hline \end{array}$$


$$\begin{array}{r} 59 \\ + 39 \\ \hline \end{array}$$


$$\begin{array}{r} 85 \\ + 61 \\ \hline \end{array}$$



$$\begin{array}{r} 48 \\ + 36 \\ \hline \end{array}$$


$$\begin{array}{r} 57 \\ + 63 \\ \hline \end{array}$$


$$\begin{array}{r} 60 \\ + 29 \\ \hline \end{array}$$


$$\begin{array}{r} 33 \\ + 49 \\ \hline \end{array}$$



$$\begin{array}{r} 92 \\ + 84 \\ \hline \end{array}$$



$$\begin{array}{r} 97 \\ + 55 \\ \hline \end{array}$$



$$\begin{array}{r} 48 \\ + 20 \\ \hline \end{array}$$


$$\begin{array}{r} 90 \\ + 55 \\ \hline \end{array}$$


$$\begin{array}{r} 22 \\ + 88 \\ \hline \end{array}$$


$$\begin{array}{r} 12 \\ + 62 \\ \hline \end{array}$$


$$\begin{array}{r} 78 \\ + 47 \\ \hline \end{array}$$


$$\begin{array}{r} 52 \\ + 26 \\ \hline \end{array}$$


$$\begin{array}{r} 55 \\ + 59 \\ \hline \end{array}$$



How many Easter eggs go in the basket?