




Easter Eggs in a Basket (H)


Put Easter eggs with sums greater than 99 in the basket.


$$\begin{array}{r} 48 \\ + 12 \\ \hline \end{array}$$



$$\begin{array}{r} 67 \\ + 73 \\ \hline \end{array}$$



$$\begin{array}{r} 47 \\ + 15 \\ \hline \end{array}$$



$$\begin{array}{r} 55 \\ + 66 \\ \hline \end{array}$$


$$\begin{array}{r} 86 \\ + 77 \\ \hline \end{array}$$


$$\begin{array}{r} 57 \\ + 90 \\ \hline \end{array}$$



$$\begin{array}{r} 65 \\ + 21 \\ \hline \end{array}$$



$$\begin{array}{r} 54 \\ + 33 \\ \hline \end{array}$$



$$\begin{array}{r} 31 \\ + 10 \\ \hline \end{array}$$


$$\begin{array}{r} 86 \\ + 59 \\ \hline \end{array}$$



$$\begin{array}{r} 74 \\ + 95 \\ \hline \end{array}$$


$$\begin{array}{r} 80 \\ + 70 \\ \hline \end{array}$$



$$\begin{array}{r} 70 \\ + 89 \\ \hline \end{array}$$



$$\begin{array}{r} 73 \\ + 79 \\ \hline \end{array}$$



$$\begin{array}{r} 57 \\ + 76 \\ \hline \end{array}$$


$$\begin{array}{r} 15 \\ + 35 \\ \hline \end{array}$$


$$\begin{array}{r} 75 \\ + 35 \\ \hline \end{array}$$


$$\begin{array}{r} 85 \\ + 29 \\ \hline \end{array}$$


$$\begin{array}{r} 75 \\ + 33 \\ \hline \end{array}$$


$$\begin{array}{r} 93 \\ + 21 \\ \hline \end{array}$$



How many Easter eggs go in the basket?