



# Easter Eggs in a Basket (I)


Put Easter eggs with sums greater than 99 in the basket.


$$\begin{array}{r} 77 \\ + 12 \\ \hline \end{array}$$



$$\begin{array}{r} 29 \\ + 18 \\ \hline \end{array}$$


$$\begin{array}{r} 36 \\ + 95 \\ \hline \end{array}$$



$$\begin{array}{r} 11 \\ + 21 \\ \hline \end{array}$$


$$\begin{array}{r} 53 \\ + 19 \\ \hline \end{array}$$


$$\begin{array}{r} 29 \\ + 59 \\ \hline \end{array}$$


$$\begin{array}{r} 37 \\ + 42 \\ \hline \end{array}$$



$$\begin{array}{r} 80 \\ + 14 \\ \hline \end{array}$$



$$\begin{array}{r} 75 \\ + 47 \\ \hline \end{array}$$


$$\begin{array}{r} 83 \\ + 44 \\ \hline \end{array}$$



$$\begin{array}{r} 69 \\ + 98 \\ \hline \end{array}$$



$$\begin{array}{r} 94 \\ + 87 \\ \hline \end{array}$$



$$\begin{array}{r} 32 \\ + 10 \\ \hline \end{array}$$



$$\begin{array}{r} 43 \\ + 24 \\ \hline \end{array}$$


$$\begin{array}{r} 15 \\ + 99 \\ \hline \end{array}$$


$$\begin{array}{r} 52 \\ + 16 \\ \hline \end{array}$$


$$\begin{array}{r} 56 \\ + 37 \\ \hline \end{array}$$


$$\begin{array}{r} 38 \\ + 38 \\ \hline \end{array}$$


$$\begin{array}{r} 12 \\ + 53 \\ \hline \end{array}$$


$$\begin{array}{r} 70 \\ + 26 \\ \hline \end{array}$$



How many Easter eggs go in the basket?