





# Easter Eggs in a Basket (J)

Put Easter eggs with sums greater than 99 in the basket.



$$\begin{array}{r} 72 \\ + 90 \\ \hline \end{array}$$



$$\begin{array}{r} 20 \\ + 91 \\ \hline \end{array}$$


$$\begin{array}{r} 49 \\ + 28 \\ \hline \end{array}$$



$$\begin{array}{r} 62 \\ + 61 \\ \hline \end{array}$$


$$\begin{array}{r} 33 \\ + 57 \\ \hline \end{array}$$


$$\begin{array}{r} 58 \\ + 45 \\ \hline \end{array}$$


$$\begin{array}{r} 94 \\ + 33 \\ \hline \end{array}$$



$$\begin{array}{r} 79 \\ + 88 \\ \hline \end{array}$$


$$\begin{array}{r} 73 \\ + 41 \\ \hline \end{array}$$


$$\begin{array}{r} 52 \\ + 65 \\ \hline \end{array}$$



$$\begin{array}{r} 87 \\ + 20 \\ \hline \end{array}$$



$$\begin{array}{r} 57 \\ + 20 \\ \hline \end{array}$$



$$\begin{array}{r} 22 \\ + 60 \\ \hline \end{array}$$



$$\begin{array}{r} 80 \\ + 67 \\ \hline \end{array}$$


$$\begin{array}{r} 56 \\ + 75 \\ \hline \end{array}$$


$$\begin{array}{r} 61 \\ + 95 \\ \hline \end{array}$$


$$\begin{array}{r} 39 \\ + 97 \\ \hline \end{array}$$


$$\begin{array}{r} 12 \\ + 79 \\ \hline \end{array}$$


$$\begin{array}{r} 78 \\ + 95 \\ \hline \end{array}$$


$$\begin{array}{r} 51 \\ + 49 \\ \hline \end{array}$$



How many Easter eggs go in the basket?