



Easter Eggs in a Basket (B)


Put Easter eggs with sums greater than 999 in the basket.



$$\begin{array}{r} 840 \\ + 169 \\ \hline \end{array}$$



$$\begin{array}{r} 251 \\ + 408 \\ \hline \end{array}$$


$$\begin{array}{r} 163 \\ + 654 \\ \hline \end{array}$$



$$\begin{array}{r} 832 \\ + 838 \\ \hline \end{array}$$



$$\begin{array}{r} 624 \\ + 748 \\ \hline \end{array}$$



$$\begin{array}{r} 445 \\ + 261 \\ \hline \end{array}$$



$$\begin{array}{r} 725 \\ + 293 \\ \hline \end{array}$$



$$\begin{array}{r} 386 \\ + 244 \\ \hline \end{array}$$


$$\begin{array}{r} 732 \\ + 519 \\ \hline \end{array}$$


$$\begin{array}{r} 109 \\ + 453 \\ \hline \end{array}$$



$$\begin{array}{r} 144 \\ + 991 \\ \hline \end{array}$$


$$\begin{array}{r} 767 \\ + 671 \\ \hline \end{array}$$



$$\begin{array}{r} 958 \\ + 134 \\ \hline \end{array}$$



$$\begin{array}{r} 336 \\ + 874 \\ \hline \end{array}$$



$$\begin{array}{r} 136 \\ + 358 \\ \hline \end{array}$$


$$\begin{array}{r} 202 \\ + 246 \\ \hline \end{array}$$


$$\begin{array}{r} 489 \\ + 656 \\ \hline \end{array}$$


$$\begin{array}{r} 269 \\ + 332 \\ \hline \end{array}$$


$$\begin{array}{r} 916 \\ + 431 \\ \hline \end{array}$$


$$\begin{array}{r} 525 \\ + 976 \\ \hline \end{array}$$



How many Easter eggs go in the basket?