



Easter Eggs in a Basket (C)

Put Easter eggs with sums greater than 999 in the basket.


$$\begin{array}{r} 605 \\ + 455 \\ \hline \end{array}$$



$$\begin{array}{r} 356 \\ + 918 \\ \hline \end{array}$$



$$\begin{array}{r} 194 \\ + 254 \\ \hline \end{array}$$



$$\begin{array}{r} 578 \\ + 554 \\ \hline \end{array}$$


$$\begin{array}{r} 945 \\ + 356 \\ \hline \end{array}$$


$$\begin{array}{r} 258 \\ + 954 \\ \hline \end{array}$$



$$\begin{array}{r} 134 \\ + 364 \\ \hline \end{array}$$


$$\begin{array}{r} 975 \\ + 370 \\ \hline \end{array}$$


$$\begin{array}{r} 128 \\ + 219 \\ \hline \end{array}$$


$$\begin{array}{r} 907 \\ + 653 \\ \hline \end{array}$$



$$\begin{array}{r} 950 \\ + 851 \\ \hline \end{array}$$



$$\begin{array}{r} 207 \\ + 531 \\ \hline \end{array}$$



$$\begin{array}{r} 329 \\ + 320 \\ \hline \end{array}$$



$$\begin{array}{r} 774 \\ + 529 \\ \hline \end{array}$$


$$\begin{array}{r} 582 \\ + 325 \\ \hline \end{array}$$


$$\begin{array}{r} 129 \\ + 841 \\ \hline \end{array}$$


$$\begin{array}{r} 564 \\ + 811 \\ \hline \end{array}$$


$$\begin{array}{r} 160 \\ + 638 \\ \hline \end{array}$$


$$\begin{array}{r} 284 \\ + 310 \\ \hline \end{array}$$


$$\begin{array}{r} 941 \\ + 377 \\ \hline \end{array}$$



How many Easter eggs go in the basket?