




Easter Eggs in a Basket (D)

Put Easter eggs with sums greater than 999 in the basket.


$$\begin{array}{r} 559 \\ + 534 \\ \hline \end{array}$$



$$\begin{array}{r} 398 \\ + 718 \\ \hline \end{array}$$



$$\begin{array}{r} 341 \\ + 287 \\ \hline \end{array}$$



$$\begin{array}{r} 703 \\ + 614 \\ \hline \end{array}$$


$$\begin{array}{r} 906 \\ + 257 \\ \hline \end{array}$$



$$\begin{array}{r} 887 \\ + 523 \\ \hline \end{array}$$



$$\begin{array}{r} 897 \\ + 648 \\ \hline \end{array}$$



$$\begin{array}{r} 505 \\ + 571 \\ \hline \end{array}$$



$$\begin{array}{r} 308 \\ + 379 \\ \hline \end{array}$$


$$\begin{array}{r} 810 \\ + 885 \\ \hline \end{array}$$



$$\begin{array}{r} 319 \\ + 201 \\ \hline \end{array}$$



$$\begin{array}{r} 428 \\ + 204 \\ \hline \end{array}$$



$$\begin{array}{r} 696 \\ + 533 \\ \hline \end{array}$$



$$\begin{array}{r} 433 \\ + 311 \\ \hline \end{array}$$


$$\begin{array}{r} 828 \\ + 243 \\ \hline \end{array}$$


$$\begin{array}{r} 399 \\ + 151 \\ \hline \end{array}$$


$$\begin{array}{r} 770 \\ + 425 \\ \hline \end{array}$$


$$\begin{array}{r} 524 \\ + 350 \\ \hline \end{array}$$


$$\begin{array}{r} 995 \\ + 347 \\ \hline \end{array}$$


$$\begin{array}{r} 346 \\ + 986 \\ \hline \end{array}$$



How many Easter eggs go in the basket?