





# Easter Eggs in a Basket (E)


Put Easter eggs with sums greater than 999 in the basket.



$$\begin{array}{r} 421 \\ + 321 \\ \hline \end{array}$$



$$\begin{array}{r} 402 \\ + 504 \\ \hline \end{array}$$



$$\begin{array}{r} 402 \\ + 460 \\ \hline \end{array}$$


$$\begin{array}{r} 798 \\ + 977 \\ \hline \end{array}$$



$$\begin{array}{r} 783 \\ + 356 \\ \hline \end{array}$$


$$\begin{array}{r} 152 \\ + 161 \\ \hline \end{array}$$



$$\begin{array}{r} 326 \\ + 314 \\ \hline \end{array}$$



$$\begin{array}{r} 302 \\ + 518 \\ \hline \end{array}$$



$$\begin{array}{r} 590 \\ + 373 \\ \hline \end{array}$$


$$\begin{array}{r} 408 \\ + 618 \\ \hline \end{array}$$



$$\begin{array}{r} 386 \\ + 462 \\ \hline \end{array}$$


$$\begin{array}{r} 454 \\ + 417 \\ \hline \end{array}$$



$$\begin{array}{r} 686 \\ + 945 \\ \hline \end{array}$$



$$\begin{array}{r} 581 \\ + 487 \\ \hline \end{array}$$


$$\begin{array}{r} 182 \\ + 600 \\ \hline \end{array}$$


$$\begin{array}{r} 749 \\ + 159 \\ \hline \end{array}$$


$$\begin{array}{r} 422 \\ + 755 \\ \hline \end{array}$$


$$\begin{array}{r} 156 \\ + 427 \\ \hline \end{array}$$


$$\begin{array}{r} 311 \\ + 527 \\ \hline \end{array}$$


$$\begin{array}{r} 323 \\ + 227 \\ \hline \end{array}$$



How many Easter eggs go in the basket?