



Easter Eggs in a Basket (F)


Put Easter eggs with sums greater than 999 in the basket.



$$\begin{array}{r} 252 \\ + 243 \\ \hline \end{array}$$



$$\begin{array}{r} 949 \\ + 338 \\ \hline \end{array}$$



$$\begin{array}{r} 245 \\ + 896 \\ \hline \end{array}$$



$$\begin{array}{r} 755 \\ + 156 \\ \hline \end{array}$$



$$\begin{array}{r} 801 \\ + 634 \\ \hline \end{array}$$



$$\begin{array}{r} 362 \\ + 378 \\ \hline \end{array}$$



$$\begin{array}{r} 539 \\ + 797 \\ \hline \end{array}$$



$$\begin{array}{r} 130 \\ + 577 \\ \hline \end{array}$$



$$\begin{array}{r} 460 \\ + 531 \\ \hline \end{array}$$



$$\begin{array}{r} 927 \\ + 994 \\ \hline \end{array}$$



$$\begin{array}{r} 445 \\ + 928 \\ \hline \end{array}$$



$$\begin{array}{r} 873 \\ + 658 \\ \hline \end{array}$$



$$\begin{array}{r} 749 \\ + 564 \\ \hline \end{array}$$



$$\begin{array}{r} 472 \\ + 844 \\ \hline \end{array}$$



$$\begin{array}{r} 165 \\ + 711 \\ \hline \end{array}$$


$$\begin{array}{r} 215 \\ + 245 \\ \hline \end{array}$$


$$\begin{array}{r} 854 \\ + 737 \\ \hline \end{array}$$


$$\begin{array}{r} 940 \\ + 144 \\ \hline \end{array}$$


$$\begin{array}{r} 523 \\ + 388 \\ \hline \end{array}$$



$$\begin{array}{r} 458 \\ + 409 \\ \hline \end{array}$$



How many Easter eggs go in the basket?


Easter Eggs in a Basket (F) Answers


Put Easter eggs with sums greater than 999 in the basket.



$$\begin{array}{r} 252 \\ + 243 \\ \hline 495 \end{array}$$


$$\begin{array}{r} 949 \\ + 338 \\ \hline 1287 \end{array}$$



$$\begin{array}{r} 245 \\ + 896 \\ \hline 1141 \end{array}$$



$$\begin{array}{r} 755 \\ + 156 \\ \hline 911 \end{array}$$


$$\begin{array}{r} 801 \\ + 634 \\ \hline 1435 \end{array}$$


$$\begin{array}{r} 362 \\ + 378 \\ \hline 740 \end{array}$$



$$\begin{array}{r} 539 \\ + 797 \\ \hline 1336 \end{array}$$


$$\begin{array}{r} 130 \\ + 577 \\ \hline 707 \end{array}$$


$$\begin{array}{r} 460 \\ + 531 \\ \hline 991 \end{array}$$



$$\begin{array}{r} 927 \\ + 994 \\ \hline 1921 \end{array}$$



$$\begin{array}{r} 445 \\ + 928 \\ \hline 1373 \end{array}$$


$$\begin{array}{r} 873 \\ + 658 \\ \hline 1531 \end{array}$$



$$\begin{array}{r} 749 \\ + 564 \\ \hline 1313 \end{array}$$



$$\begin{array}{r} 472 \\ + 844 \\ \hline 1316 \end{array}$$



$$\begin{array}{r} 165 \\ + 711 \\ \hline 876 \end{array}$$


$$\begin{array}{r} 215 \\ + 245 \\ \hline 460 \end{array}$$


$$\begin{array}{r} 854 \\ + 737 \\ \hline 1591 \end{array}$$


$$\begin{array}{r} 940 \\ + 144 \\ \hline 1084 \end{array}$$


$$\begin{array}{r} 523 \\ + 388 \\ \hline 911 \end{array}$$


$$\begin{array}{r} 458 \\ + 409 \\ \hline 867 \end{array}$$



How many Easter eggs go in the basket?

11