




Easter Eggs in a Basket (G)

Put Easter eggs with sums greater than 999 in the basket.



$$\begin{array}{r} 348 \\ + 991 \\ \hline \end{array}$$



$$\begin{array}{r} 401 \\ + 147 \\ \hline \end{array}$$



$$\begin{array}{r} 633 \\ + 512 \\ \hline \end{array}$$



$$\begin{array}{r} 560 \\ + 583 \\ \hline \end{array}$$


$$\begin{array}{r} 999 \\ + 863 \\ \hline \end{array}$$



$$\begin{array}{r} 477 \\ + 374 \\ \hline \end{array}$$



$$\begin{array}{r} 113 \\ + 760 \\ \hline \end{array}$$



$$\begin{array}{r} 228 \\ + 210 \\ \hline \end{array}$$


$$\begin{array}{r} 277 \\ + 565 \\ \hline \end{array}$$



$$\begin{array}{r} 908 \\ + 427 \\ \hline \end{array}$$



$$\begin{array}{r} 172 \\ + 137 \\ \hline \end{array}$$



$$\begin{array}{r} 537 \\ + 408 \\ \hline \end{array}$$



$$\begin{array}{r} 400 \\ + 135 \\ \hline \end{array}$$



$$\begin{array}{r} 705 \\ + 493 \\ \hline \end{array}$$



$$\begin{array}{r} 165 \\ + 243 \\ \hline \end{array}$$


$$\begin{array}{r} 230 \\ + 707 \\ \hline \end{array}$$


$$\begin{array}{r} 772 \\ + 468 \\ \hline \end{array}$$


$$\begin{array}{r} 957 \\ + 532 \\ \hline \end{array}$$


$$\begin{array}{r} 205 \\ + 243 \\ \hline \end{array}$$


$$\begin{array}{r} 671 \\ + 827 \\ \hline \end{array}$$



How many Easter eggs go in the basket?