



Easter Eggs in a Basket (H)


Put Easter eggs with sums greater than 999 in the basket.


$$\begin{array}{r} 128 \\ + 773 \\ \hline \end{array}$$



$$\begin{array}{r} 530 \\ + 641 \\ \hline \end{array}$$



$$\begin{array}{r} 307 \\ + 616 \\ \hline \end{array}$$



$$\begin{array}{r} 165 \\ + 819 \\ \hline \end{array}$$


$$\begin{array}{r} 947 \\ + 239 \\ \hline \end{array}$$



$$\begin{array}{r} 288 \\ + 481 \\ \hline \end{array}$$



$$\begin{array}{r} 718 \\ + 812 \\ \hline \end{array}$$



$$\begin{array}{r} 565 \\ + 106 \\ \hline \end{array}$$



$$\begin{array}{r} 685 \\ + 177 \\ \hline \end{array}$$


$$\begin{array}{r} 923 \\ + 571 \\ \hline \end{array}$$



$$\begin{array}{r} 238 \\ + 237 \\ \hline \end{array}$$



$$\begin{array}{r} 878 \\ + 251 \\ \hline \end{array}$$



$$\begin{array}{r} 872 \\ + 393 \\ \hline \end{array}$$



$$\begin{array}{r} 692 \\ + 894 \\ \hline \end{array}$$


$$\begin{array}{r} 523 \\ + 587 \\ \hline \end{array}$$


$$\begin{array}{r} 340 \\ + 560 \\ \hline \end{array}$$


$$\begin{array}{r} 892 \\ + 162 \\ \hline \end{array}$$


$$\begin{array}{r} 155 \\ + 362 \\ \hline \end{array}$$


$$\begin{array}{r} 323 \\ + 138 \\ \hline \end{array}$$


$$\begin{array}{r} 910 \\ + 988 \\ \hline \end{array}$$



How many Easter eggs go in the basket?