




Easter Eggs in a Basket (I)


Put Easter eggs with sums greater than 999 in the basket.


$$\begin{array}{r} 778 \\ + 184 \\ \hline \end{array}$$



$$\begin{array}{r} 657 \\ + 223 \\ \hline \end{array}$$



$$\begin{array}{r} 301 \\ + 821 \\ \hline \end{array}$$



$$\begin{array}{r} 628 \\ + 428 \\ \hline \end{array}$$


$$\begin{array}{r} 760 \\ + 378 \\ \hline \end{array}$$



$$\begin{array}{r} 339 \\ + 745 \\ \hline \end{array}$$


$$\begin{array}{r} 192 \\ + 511 \\ \hline \end{array}$$



$$\begin{array}{r} 322 \\ + 636 \\ \hline \end{array}$$



$$\begin{array}{r} 409 \\ + 925 \\ \hline \end{array}$$


$$\begin{array}{r} 558 \\ + 135 \\ \hline \end{array}$$



$$\begin{array}{r} 416 \\ + 743 \\ \hline \end{array}$$



$$\begin{array}{r} 808 \\ + 471 \\ \hline \end{array}$$



$$\begin{array}{r} 613 \\ + 801 \\ \hline \end{array}$$



$$\begin{array}{r} 453 \\ + 540 \\ \hline \end{array}$$


$$\begin{array}{r} 943 \\ + 773 \\ \hline \end{array}$$


$$\begin{array}{r} 983 \\ + 531 \\ \hline \end{array}$$


$$\begin{array}{r} 261 \\ + 899 \\ \hline \end{array}$$


$$\begin{array}{r} 427 \\ + 870 \\ \hline \end{array}$$


$$\begin{array}{r} 259 \\ + 714 \\ \hline \end{array}$$


$$\begin{array}{r} 507 \\ + 447 \\ \hline \end{array}$$



How many Easter eggs go in the basket?