




Easter Eggs in a Basket (J)


Put Easter eggs with sums greater than 999 in the basket.



$$\begin{array}{r} 457 \\ + 145 \\ \hline \end{array}$$



$$\begin{array}{r} 903 \\ + 713 \\ \hline \end{array}$$



$$\begin{array}{r} 984 \\ + 586 \\ \hline \end{array}$$


$$\begin{array}{r} 654 \\ + 251 \\ \hline \end{array}$$



$$\begin{array}{r} 614 \\ + 332 \\ \hline \end{array}$$



$$\begin{array}{r} 620 \\ + 101 \\ \hline \end{array}$$



$$\begin{array}{r} 659 \\ + 801 \\ \hline \end{array}$$


$$\begin{array}{r} 681 \\ + 349 \\ \hline \end{array}$$


$$\begin{array}{r} 862 \\ + 698 \\ \hline \end{array}$$


$$\begin{array}{r} 462 \\ + 197 \\ \hline \end{array}$$



$$\begin{array}{r} 331 \\ + 146 \\ \hline \end{array}$$



$$\begin{array}{r} 708 \\ + 317 \\ \hline \end{array}$$



$$\begin{array}{r} 393 \\ + 535 \\ \hline \end{array}$$



$$\begin{array}{r} 331 \\ + 883 \\ \hline \end{array}$$


$$\begin{array}{r} 485 \\ + 274 \\ \hline \end{array}$$


$$\begin{array}{r} 453 \\ + 415 \\ \hline \end{array}$$


$$\begin{array}{r} 170 \\ + 747 \\ \hline \end{array}$$


$$\begin{array}{r} 673 \\ + 988 \\ \hline \end{array}$$


$$\begin{array}{r} 626 \\ + 616 \\ \hline \end{array}$$


$$\begin{array}{r} 755 \\ + 258 \\ \hline \end{array}$$



How many Easter eggs go in the basket?