




# Easter Eggs in a Basket (A)


Put Easter eggs with sums greater than 999 in the basket.



$$\begin{array}{r} 280 \\ + 764 \\ \hline \end{array}$$



$$\begin{array}{r} 272 \\ + 746 \\ \hline \end{array}$$


$$\begin{array}{r} 507 \\ + 197 \\ \hline \end{array}$$



$$\begin{array}{r} 411 \\ + 101 \\ \hline \end{array}$$


$$\begin{array}{r} 325 \\ + 707 \\ \hline \end{array}$$



$$\begin{array}{r} 887 \\ + 216 \\ \hline \end{array}$$


$$\begin{array}{r} 583 \\ + 944 \\ \hline \end{array}$$



$$\begin{array}{r} 466 \\ + 460 \\ \hline \end{array}$$



$$\begin{array}{r} 758 \\ + 961 \\ \hline \end{array}$$


$$\begin{array}{r} 515 \\ + 504 \\ \hline \end{array}$$



$$\begin{array}{r} 231 \\ + 767 \\ \hline \end{array}$$


$$\begin{array}{r} 196 \\ + 849 \\ \hline \end{array}$$



$$\begin{array}{r} 633 \\ + 316 \\ \hline \end{array}$$



$$\begin{array}{r} 207 \\ + 965 \\ \hline \end{array}$$


$$\begin{array}{r} 790 \\ + 473 \\ \hline \end{array}$$


$$\begin{array}{r} 797 \\ + 295 \\ \hline \end{array}$$


$$\begin{array}{r} 132 \\ + 445 \\ \hline \end{array}$$


$$\begin{array}{r} 633 \\ + 965 \\ \hline \end{array}$$


$$\begin{array}{r} 638 \\ + 804 \\ \hline \end{array}$$



$$\begin{array}{r} 464 \\ + 356 \\ \hline \end{array}$$




How many Easter eggs go in the basket?


# Easter Eggs in a Basket (A) Answers


Put Easter eggs with sums greater than 999 in the basket.


$$\begin{array}{r} 280 \\ + 764 \\ \hline 1044 \end{array}$$


$$\begin{array}{r} 272 \\ + 746 \\ \hline 1018 \end{array}$$


$$\begin{array}{r} 507 \\ + 197 \\ \hline 704 \end{array}$$


$$\begin{array}{r} 411 \\ + 101 \\ \hline 512 \end{array}$$



$$\begin{array}{r} 325 \\ + 707 \\ \hline 1032 \end{array}$$



$$\begin{array}{r} 887 \\ + 216 \\ \hline 1103 \end{array}$$



$$\begin{array}{r} 583 \\ + 944 \\ \hline 1527 \end{array}$$


$$\begin{array}{r} 466 \\ + 460 \\ \hline 926 \end{array}$$


$$\begin{array}{r} 758 \\ + 961 \\ \hline 1719 \end{array}$$



$$\begin{array}{r} 515 \\ + 504 \\ \hline 1019 \end{array}$$



$$\begin{array}{r} 231 \\ + 767 \\ \hline 998 \end{array}$$



$$\begin{array}{r} 196 \\ + 849 \\ \hline 1045 \end{array}$$



$$\begin{array}{r} 633 \\ + 316 \\ \hline 949 \end{array}$$


$$\begin{array}{r} 207 \\ + 965 \\ \hline 1172 \end{array}$$



$$\begin{array}{r} 790 \\ + 473 \\ \hline 1263 \end{array}$$


$$\begin{array}{r} 797 \\ + 295 \\ \hline 1092 \end{array}$$


$$\begin{array}{r} 132 \\ + 445 \\ \hline 577 \end{array}$$


$$\begin{array}{r} 633 \\ + 965 \\ \hline 1598 \end{array}$$


$$\begin{array}{r} 638 \\ + 804 \\ \hline 1442 \end{array}$$


$$\begin{array}{r} 464 \\ + 356 \\ \hline 820 \end{array}$$




How many Easter eggs go in the basket?

13


## Easter Eggs in a Basket (B)


Put Easter eggs with sums greater than 999 in the basket.



$$\begin{array}{r} 840 \\ + 169 \\ \hline \end{array}$$



$$\begin{array}{r} 251 \\ + 408 \\ \hline \end{array}$$



$$\begin{array}{r} 163 \\ + 654 \\ \hline \end{array}$$



$$\begin{array}{r} 832 \\ + 838 \\ \hline \end{array}$$



$$\begin{array}{r} 624 \\ + 748 \\ \hline \end{array}$$



$$\begin{array}{r} 445 \\ + 261 \\ \hline \end{array}$$



$$\begin{array}{r} 725 \\ + 293 \\ \hline \end{array}$$



$$\begin{array}{r} 386 \\ + 244 \\ \hline \end{array}$$


$$\begin{array}{r} 732 \\ + 519 \\ \hline \end{array}$$


$$\begin{array}{r} 109 \\ + 453 \\ \hline \end{array}$$



$$\begin{array}{r} 144 \\ + 991 \\ \hline \end{array}$$



$$\begin{array}{r} 767 \\ + 671 \\ \hline \end{array}$$



$$\begin{array}{r} 958 \\ + 134 \\ \hline \end{array}$$



$$\begin{array}{r} 336 \\ + 874 \\ \hline \end{array}$$


$$\begin{array}{r} 136 \\ + 358 \\ \hline \end{array}$$


$$\begin{array}{r} 202 \\ + 246 \\ \hline \end{array}$$


$$\begin{array}{r} 489 \\ + 656 \\ \hline \end{array}$$


$$\begin{array}{r} 269 \\ + 332 \\ \hline \end{array}$$


$$\begin{array}{r} 916 \\ + 431 \\ \hline \end{array}$$



$$\begin{array}{r} 525 \\ + 976 \\ \hline \end{array}$$




How many Easter eggs go in the basket?


## Easter Eggs in a Basket (B) Answers

Put Easter eggs with sums greater than 999 in the basket.


$$\begin{array}{r} 840 \\ + 169 \\ \hline 1009 \end{array}$$


$$\begin{array}{r} 251 \\ + 408 \\ \hline 659 \end{array}$$


$$\begin{array}{r} 163 \\ + 654 \\ \hline 817 \end{array}$$


$$\begin{array}{r} 832 \\ + 838 \\ \hline 1670 \end{array}$$



$$\begin{array}{r} 624 \\ + 748 \\ \hline 1372 \end{array}$$


$$\begin{array}{r} 445 \\ + 261 \\ \hline 706 \end{array}$$



$$\begin{array}{r} 725 \\ + 293 \\ \hline 1018 \end{array}$$



$$\begin{array}{r} 386 \\ + 244 \\ \hline 630 \end{array}$$



$$\begin{array}{r} 732 \\ + 519 \\ \hline 1251 \end{array}$$


$$\begin{array}{r} 109 \\ + 453 \\ \hline 562 \end{array}$$



$$\begin{array}{r} 144 \\ + 991 \\ \hline 1135 \end{array}$$


$$\begin{array}{r} 767 \\ + 671 \\ \hline 1438 \end{array}$$



$$\begin{array}{r} 958 \\ + 134 \\ \hline 1092 \end{array}$$


$$\begin{array}{r} 336 \\ + 874 \\ \hline 1210 \end{array}$$



$$\begin{array}{r} 136 \\ + 358 \\ \hline 494 \end{array}$$


$$\begin{array}{r} 202 \\ + 246 \\ \hline 448 \end{array}$$


$$\begin{array}{r} 489 \\ + 656 \\ \hline 1145 \end{array}$$


$$\begin{array}{r} 269 \\ + 332 \\ \hline 601 \end{array}$$


$$\begin{array}{r} 916 \\ + 431 \\ \hline 1347 \end{array}$$


$$\begin{array}{r} 525 \\ + 976 \\ \hline 1501 \end{array}$$




How many Easter eggs go in the basket?

12

## Easter Eggs in a Basket (C)

Put Easter eggs with sums greater than 999 in the basket.



$$\begin{array}{r} 605 \\ + 455 \\ \hline \end{array}$$



$$\begin{array}{r} 356 \\ + 918 \\ \hline \end{array}$$



$$\begin{array}{r} 194 \\ + 254 \\ \hline \end{array}$$



$$\begin{array}{r} 578 \\ + 554 \\ \hline \end{array}$$



$$\begin{array}{r} 945 \\ + 356 \\ \hline \end{array}$$



$$\begin{array}{r} 258 \\ + 954 \\ \hline \end{array}$$



$$\begin{array}{r} 134 \\ + 364 \\ \hline \end{array}$$


$$\begin{array}{r} 975 \\ + 370 \\ \hline \end{array}$$


$$\begin{array}{r} 128 \\ + 219 \\ \hline \end{array}$$


$$\begin{array}{r} 907 \\ + 653 \\ \hline \end{array}$$



$$\begin{array}{r} 950 \\ + 851 \\ \hline \end{array}$$


$$\begin{array}{r} 207 \\ + 531 \\ \hline \end{array}$$



$$\begin{array}{r} 329 \\ + 320 \\ \hline \end{array}$$



$$\begin{array}{r} 774 \\ + 529 \\ \hline \end{array}$$


$$\begin{array}{r} 582 \\ + 325 \\ \hline \end{array}$$


$$\begin{array}{r} 129 \\ + 841 \\ \hline \end{array}$$


$$\begin{array}{r} 564 \\ + 811 \\ \hline \end{array}$$


$$\begin{array}{r} 160 \\ + 638 \\ \hline \end{array}$$


$$\begin{array}{r} 284 \\ + 310 \\ \hline \end{array}$$


$$\begin{array}{r} 941 \\ + 377 \\ \hline \end{array}$$





How many Easter eggs go in the basket?


# Easter Eggs in a Basket (C) Answers


Put Easter eggs with sums greater than 999 in the basket.


$$\begin{array}{r} 605 \\ + 455 \\ \hline 1060 \end{array}$$


$$\begin{array}{r} 356 \\ + 918 \\ \hline 1274 \end{array}$$



$$\begin{array}{r} 194 \\ + 254 \\ \hline 448 \end{array}$$



$$\begin{array}{r} 578 \\ + 554 \\ \hline 1132 \end{array}$$



$$\begin{array}{r} 945 \\ + 356 \\ \hline 1301 \end{array}$$


$$\begin{array}{r} 258 \\ + 954 \\ \hline 1212 \end{array}$$


$$\begin{array}{r} 134 \\ + 364 \\ \hline 498 \end{array}$$


$$\begin{array}{r} 975 \\ + 370 \\ \hline 1345 \end{array}$$



$$\begin{array}{r} 128 \\ + 219 \\ \hline 347 \end{array}$$


$$\begin{array}{r} 907 \\ + 653 \\ \hline 1560 \end{array}$$



$$\begin{array}{r} 950 \\ + 851 \\ \hline 1801 \end{array}$$


$$\begin{array}{r} 207 \\ + 531 \\ \hline 738 \end{array}$$



$$\begin{array}{r} 329 \\ + 320 \\ \hline 649 \end{array}$$


$$\begin{array}{r} 774 \\ + 529 \\ \hline 1303 \end{array}$$


$$\begin{array}{r} 582 \\ + 325 \\ \hline 907 \end{array}$$


$$\begin{array}{r} 129 \\ + 841 \\ \hline 970 \end{array}$$


$$\begin{array}{r} 564 \\ + 811 \\ \hline 1375 \end{array}$$


$$\begin{array}{r} 160 \\ + 638 \\ \hline 798 \end{array}$$


$$\begin{array}{r} 284 \\ + 310 \\ \hline 594 \end{array}$$


$$\begin{array}{r} 941 \\ + 377 \\ \hline 1318 \end{array}$$




How many Easter eggs go in the basket?


11


## Easter Eggs in a Basket (D)

Put Easter eggs with sums greater than 999 in the basket.


$$\begin{array}{r} 559 \\ + 534 \\ \hline \end{array}$$



$$\begin{array}{r} 398 \\ + 718 \\ \hline \end{array}$$



$$\begin{array}{r} 341 \\ + 287 \\ \hline \end{array}$$



$$\begin{array}{r} 703 \\ + 614 \\ \hline \end{array}$$


$$\begin{array}{r} 906 \\ + 257 \\ \hline \end{array}$$



$$\begin{array}{r} 887 \\ + 523 \\ \hline \end{array}$$



$$\begin{array}{r} 897 \\ + 648 \\ \hline \end{array}$$



$$\begin{array}{r} 505 \\ + 571 \\ \hline \end{array}$$



$$\begin{array}{r} 308 \\ + 379 \\ \hline \end{array}$$


$$\begin{array}{r} 810 \\ + 885 \\ \hline \end{array}$$



$$\begin{array}{r} 319 \\ + 201 \\ \hline \end{array}$$


$$\begin{array}{r} 428 \\ + 204 \\ \hline \end{array}$$



$$\begin{array}{r} 696 \\ + 533 \\ \hline \end{array}$$



$$\begin{array}{r} 433 \\ + 311 \\ \hline \end{array}$$


$$\begin{array}{r} 828 \\ + 243 \\ \hline \end{array}$$


$$\begin{array}{r} 399 \\ + 151 \\ \hline \end{array}$$


$$\begin{array}{r} 770 \\ + 425 \\ \hline \end{array}$$


$$\begin{array}{r} 524 \\ + 350 \\ \hline \end{array}$$


$$\begin{array}{r} 995 \\ + 347 \\ \hline \end{array}$$


$$\begin{array}{r} 346 \\ + 986 \\ \hline \end{array}$$



How many Easter eggs go in the basket?


# Easter Eggs in a Basket (D) Answers

Put Easter eggs with sums greater than 999 in the basket.


$$\begin{array}{r} 559 \\ + 534 \\ \hline 1093 \end{array}$$


$$\begin{array}{r} 398 \\ + 718 \\ \hline 1116 \end{array}$$



$$\begin{array}{r} 341 \\ + 287 \\ \hline 628 \end{array}$$


$$\begin{array}{r} 703 \\ + 614 \\ \hline 1317 \end{array}$$



$$\begin{array}{r} 906 \\ + 257 \\ \hline 1163 \end{array}$$


$$\begin{array}{r} 887 \\ + 523 \\ \hline 1410 \end{array}$$



$$\begin{array}{r} 897 \\ + 648 \\ \hline 1545 \end{array}$$


$$\begin{array}{r} 505 \\ + 571 \\ \hline 1076 \end{array}$$


$$\begin{array}{r} 308 \\ + 379 \\ \hline 687 \end{array}$$


$$\begin{array}{r} 810 \\ + 885 \\ \hline 1695 \end{array}$$


$$\begin{array}{r} 319 \\ + 201 \\ \hline 520 \end{array}$$


$$\begin{array}{r} 428 \\ + 204 \\ \hline 632 \end{array}$$



$$\begin{array}{r} 696 \\ + 533 \\ \hline 1229 \end{array}$$


$$\begin{array}{r} 433 \\ + 311 \\ \hline 744 \end{array}$$



$$\begin{array}{r} 828 \\ + 243 \\ \hline 1071 \end{array}$$


$$\begin{array}{r} 399 \\ + 151 \\ \hline 550 \end{array}$$


$$\begin{array}{r} 770 \\ + 425 \\ \hline 1195 \end{array}$$


$$\begin{array}{r} 524 \\ + 350 \\ \hline 874 \end{array}$$


$$\begin{array}{r} 995 \\ + 347 \\ \hline 1342 \end{array}$$


$$\begin{array}{r} 346 \\ + 986 \\ \hline 1332 \end{array}$$




How many Easter eggs go in the basket?


13




# Easter Eggs in a Basket (E)

Put Easter eggs with sums greater than 999 in the basket.



$$\begin{array}{r} 421 \\ + 321 \\ \hline \end{array}$$



$$\begin{array}{r} 402 \\ + 504 \\ \hline \end{array}$$



$$\begin{array}{r} 402 \\ + 460 \\ \hline \end{array}$$


$$\begin{array}{r} 798 \\ + 977 \\ \hline \end{array}$$



$$\begin{array}{r} 783 \\ + 356 \\ \hline \end{array}$$


$$\begin{array}{r} 152 \\ + 161 \\ \hline \end{array}$$



$$\begin{array}{r} 326 \\ + 314 \\ \hline \end{array}$$



$$\begin{array}{r} 302 \\ + 518 \\ \hline \end{array}$$



$$\begin{array}{r} 590 \\ + 373 \\ \hline \end{array}$$


$$\begin{array}{r} 408 \\ + 618 \\ \hline \end{array}$$



$$\begin{array}{r} 386 \\ + 462 \\ \hline \end{array}$$



$$\begin{array}{r} 454 \\ + 417 \\ \hline \end{array}$$



$$\begin{array}{r} 686 \\ + 945 \\ \hline \end{array}$$



$$\begin{array}{r} 581 \\ + 487 \\ \hline \end{array}$$



$$\begin{array}{r} 182 \\ + 600 \\ \hline \end{array}$$


$$\begin{array}{r} 749 \\ + 159 \\ \hline \end{array}$$


$$\begin{array}{r} 422 \\ + 755 \\ \hline \end{array}$$


$$\begin{array}{r} 156 \\ + 427 \\ \hline \end{array}$$


$$\begin{array}{r} 311 \\ + 527 \\ \hline \end{array}$$



$$\begin{array}{r} 323 \\ + 227 \\ \hline \end{array}$$



How many Easter eggs go in the basket?

# Easter Eggs in a Basket (E) Answers


Put Easter eggs with sums greater than 999 in the basket.



$$\begin{array}{r} 421 \\ + 321 \\ \hline 742 \end{array}$$


$$\begin{array}{r} 402 \\ + 504 \\ \hline 906 \end{array}$$



$$\begin{array}{r} 402 \\ + 460 \\ \hline 862 \end{array}$$


$$\begin{array}{r} 798 \\ + 977 \\ \hline 1775 \end{array}$$



$$\begin{array}{r} 783 \\ + 356 \\ \hline 1139 \end{array}$$


$$\begin{array}{r} 152 \\ + 161 \\ \hline 313 \end{array}$$



$$\begin{array}{r} 326 \\ + 314 \\ \hline 640 \end{array}$$


$$\begin{array}{r} 302 \\ + 518 \\ \hline 820 \end{array}$$


$$\begin{array}{r} 590 \\ + 373 \\ \hline 963 \end{array}$$



$$\begin{array}{r} 408 \\ + 618 \\ \hline 1026 \end{array}$$



$$\begin{array}{r} 386 \\ + 462 \\ \hline 848 \end{array}$$



$$\begin{array}{r} 454 \\ + 417 \\ \hline 871 \end{array}$$



$$\begin{array}{r} 686 \\ + 945 \\ \hline 1631 \end{array}$$


$$\begin{array}{r} 581 \\ + 487 \\ \hline 1068 \end{array}$$



$$\begin{array}{r} 182 \\ + 600 \\ \hline 782 \end{array}$$


$$\begin{array}{r} 749 \\ + 159 \\ \hline 908 \end{array}$$


$$\begin{array}{r} 422 \\ + 755 \\ \hline 1177 \end{array}$$


$$\begin{array}{r} 156 \\ + 427 \\ \hline 583 \end{array}$$


$$\begin{array}{r} 311 \\ + 527 \\ \hline 838 \end{array}$$


$$\begin{array}{r} 323 \\ + 227 \\ \hline 550 \end{array}$$




How many Easter eggs go in the basket?

6


## Easter Eggs in a Basket (F)


Put Easter eggs with sums greater than 999 in the basket.



$$\begin{array}{r} 252 \\ + 243 \\ \hline \end{array}$$



$$\begin{array}{r} 949 \\ + 338 \\ \hline \end{array}$$



$$\begin{array}{r} 245 \\ + 896 \\ \hline \end{array}$$


$$\begin{array}{r} 755 \\ + 156 \\ \hline \end{array}$$


$$\begin{array}{r} 801 \\ + 634 \\ \hline \end{array}$$


$$\begin{array}{r} 362 \\ + 378 \\ \hline \end{array}$$



$$\begin{array}{r} 539 \\ + 797 \\ \hline \end{array}$$



$$\begin{array}{r} 130 \\ + 577 \\ \hline \end{array}$$


$$\begin{array}{r} 460 \\ + 531 \\ \hline \end{array}$$



$$\begin{array}{r} 927 \\ + 994 \\ \hline \end{array}$$



$$\begin{array}{r} 445 \\ + 928 \\ \hline \end{array}$$



$$\begin{array}{r} 873 \\ + 658 \\ \hline \end{array}$$



$$\begin{array}{r} 749 \\ + 564 \\ \hline \end{array}$$


$$\begin{array}{r} 472 \\ + 844 \\ \hline \end{array}$$



$$\begin{array}{r} 165 \\ + 711 \\ \hline \end{array}$$


$$\begin{array}{r} 215 \\ + 245 \\ \hline \end{array}$$


$$\begin{array}{r} 854 \\ + 737 \\ \hline \end{array}$$


$$\begin{array}{r} 940 \\ + 144 \\ \hline \end{array}$$


$$\begin{array}{r} 523 \\ + 388 \\ \hline \end{array}$$



$$\begin{array}{r} 458 \\ + 409 \\ \hline \end{array}$$



How many Easter eggs go in the basket?


# Easter Eggs in a Basket (F) Answers

Put Easter eggs with sums greater than 999 in the basket.



$$\begin{array}{r} 252 \\ + 243 \\ \hline 495 \end{array}$$


$$\begin{array}{r} 949 \\ + 338 \\ \hline 1287 \end{array}$$


$$\begin{array}{r} 245 \\ + 896 \\ \hline 1141 \end{array}$$



$$\begin{array}{r} 755 \\ + 156 \\ \hline 911 \end{array}$$


$$\begin{array}{r} 801 \\ + 634 \\ \hline 1435 \end{array}$$


$$\begin{array}{r} 362 \\ + 378 \\ \hline 740 \end{array}$$



$$\begin{array}{r} 539 \\ + 797 \\ \hline 1336 \end{array}$$


$$\begin{array}{r} 130 \\ + 577 \\ \hline 707 \end{array}$$


$$\begin{array}{r} 460 \\ + 531 \\ \hline 991 \end{array}$$



$$\begin{array}{r} 927 \\ + 994 \\ \hline 1921 \end{array}$$



$$\begin{array}{r} 445 \\ + 928 \\ \hline 1373 \end{array}$$


$$\begin{array}{r} 873 \\ + 658 \\ \hline 1531 \end{array}$$



$$\begin{array}{r} 749 \\ + 564 \\ \hline 1313 \end{array}$$


$$\begin{array}{r} 472 \\ + 844 \\ \hline 1316 \end{array}$$



$$\begin{array}{r} 165 \\ + 711 \\ \hline 876 \end{array}$$


$$\begin{array}{r} 215 \\ + 245 \\ \hline 460 \end{array}$$


$$\begin{array}{r} 854 \\ + 737 \\ \hline 1591 \end{array}$$


$$\begin{array}{r} 940 \\ + 144 \\ \hline 1084 \end{array}$$


$$\begin{array}{r} 523 \\ + 388 \\ \hline 911 \end{array}$$


$$\begin{array}{r} 458 \\ + 409 \\ \hline 867 \end{array}$$




How many Easter eggs go in the basket?


11


# Easter Eggs in a Basket (G)

Put Easter eggs with sums greater than 999 in the basket.



$$\begin{array}{r} 348 \\ + 991 \\ \hline \end{array}$$



$$\begin{array}{r} 401 \\ + 147 \\ \hline \end{array}$$



$$\begin{array}{r} 633 \\ + 512 \\ \hline \end{array}$$



$$\begin{array}{r} 560 \\ + 583 \\ \hline \end{array}$$



$$\begin{array}{r} 999 \\ + 863 \\ \hline \end{array}$$



$$\begin{array}{r} 477 \\ + 374 \\ \hline \end{array}$$


$$\begin{array}{r} 113 \\ + 760 \\ \hline \end{array}$$



$$\begin{array}{r} 228 \\ + 210 \\ \hline \end{array}$$



$$\begin{array}{r} 277 \\ + 565 \\ \hline \end{array}$$


$$\begin{array}{r} 908 \\ + 427 \\ \hline \end{array}$$



$$\begin{array}{r} 172 \\ + 137 \\ \hline \end{array}$$



$$\begin{array}{r} 537 \\ + 408 \\ \hline \end{array}$$



$$\begin{array}{r} 400 \\ + 135 \\ \hline \end{array}$$



$$\begin{array}{r} 705 \\ + 493 \\ \hline \end{array}$$



$$\begin{array}{r} 165 \\ + 243 \\ \hline \end{array}$$


$$\begin{array}{r} 230 \\ + 707 \\ \hline \end{array}$$


$$\begin{array}{r} 772 \\ + 468 \\ \hline \end{array}$$


$$\begin{array}{r} 957 \\ + 532 \\ \hline \end{array}$$


$$\begin{array}{r} 205 \\ + 243 \\ \hline \end{array}$$


$$\begin{array}{r} 671 \\ + 827 \\ \hline \end{array}$$



How many Easter eggs go in the basket?

# Easter Eggs in a Basket (G) Answers

Put Easter eggs with sums greater than 999 in the basket.


$$\begin{array}{r} 348 \\ + 991 \\ \hline 1339 \end{array}$$


$$\begin{array}{r} 401 \\ + 147 \\ \hline 548 \end{array}$$



$$\begin{array}{r} 633 \\ + 512 \\ \hline 1145 \end{array}$$


$$\begin{array}{r} 560 \\ + 583 \\ \hline 1143 \end{array}$$


$$\begin{array}{r} 999 \\ + 863 \\ \hline 1862 \end{array}$$


$$\begin{array}{r} 477 \\ + 374 \\ \hline 851 \end{array}$$



$$\begin{array}{r} 113 \\ + 760 \\ \hline 873 \end{array}$$


$$\begin{array}{r} 228 \\ + 210 \\ \hline 438 \end{array}$$



$$\begin{array}{r} 277 \\ + 565 \\ \hline 842 \end{array}$$


$$\begin{array}{r} 908 \\ + 427 \\ \hline 1335 \end{array}$$



$$\begin{array}{r} 172 \\ + 137 \\ \hline 309 \end{array}$$


$$\begin{array}{r} 537 \\ + 408 \\ \hline 945 \end{array}$$


$$\begin{array}{r} 400 \\ + 135 \\ \hline 535 \end{array}$$



$$\begin{array}{r} 705 \\ + 493 \\ \hline 1198 \end{array}$$


$$\begin{array}{r} 165 \\ + 243 \\ \hline 408 \end{array}$$


$$\begin{array}{r} 230 \\ + 707 \\ \hline 937 \end{array}$$


$$\begin{array}{r} 772 \\ + 468 \\ \hline 1240 \end{array}$$


$$\begin{array}{r} 957 \\ + 532 \\ \hline 1489 \end{array}$$


$$\begin{array}{r} 205 \\ + 243 \\ \hline 448 \end{array}$$


$$\begin{array}{r} 671 \\ + 827 \\ \hline 1498 \end{array}$$




How many Easter eggs go in the basket?

9

# Easter Eggs in a Basket (H)


Put Easter eggs with sums greater than 999 in the basket.



$$\begin{array}{r} 128 \\ + 773 \\ \hline \end{array}$$



$$\begin{array}{r} 530 \\ + 641 \\ \hline \end{array}$$



$$\begin{array}{r} 307 \\ + 616 \\ \hline \end{array}$$


$$\begin{array}{r} 165 \\ + 819 \\ \hline \end{array}$$


$$\begin{array}{r} 947 \\ + 239 \\ \hline \end{array}$$



$$\begin{array}{r} 288 \\ + 481 \\ \hline \end{array}$$



$$\begin{array}{r} 718 \\ + 812 \\ \hline \end{array}$$



$$\begin{array}{r} 565 \\ + 106 \\ \hline \end{array}$$


$$\begin{array}{r} 685 \\ + 177 \\ \hline \end{array}$$


$$\begin{array}{r} 923 \\ + 571 \\ \hline \end{array}$$



$$\begin{array}{r} 238 \\ + 237 \\ \hline \end{array}$$



$$\begin{array}{r} 878 \\ + 251 \\ \hline \end{array}$$



$$\begin{array}{r} 872 \\ + 393 \\ \hline \end{array}$$



$$\begin{array}{r} 692 \\ + 894 \\ \hline \end{array}$$


$$\begin{array}{r} 523 \\ + 587 \\ \hline \end{array}$$


$$\begin{array}{r} 340 \\ + 560 \\ \hline \end{array}$$


$$\begin{array}{r} 892 \\ + 162 \\ \hline \end{array}$$


$$\begin{array}{r} 155 \\ + 362 \\ \hline \end{array}$$


$$\begin{array}{r} 323 \\ + 138 \\ \hline \end{array}$$



$$\begin{array}{r} 910 \\ + 988 \\ \hline \end{array}$$



How many Easter eggs go in the basket?


# Easter Eggs in a Basket (H) Answers

Put Easter eggs with sums greater than 999 in the basket.



$$\begin{array}{r} 128 \\ + 773 \\ \hline 901 \end{array}$$


$$\begin{array}{r} 530 \\ + 641 \\ \hline 1171 \end{array}$$



$$\begin{array}{r} 307 \\ + 616 \\ \hline 923 \end{array}$$


$$\begin{array}{r} 165 \\ + 819 \\ \hline 984 \end{array}$$


$$\begin{array}{r} 947 \\ + 239 \\ \hline 1186 \end{array}$$


$$\begin{array}{r} 288 \\ + 481 \\ \hline 769 \end{array}$$



$$\begin{array}{r} 718 \\ + 812 \\ \hline 1530 \end{array}$$


$$\begin{array}{r} 565 \\ + 106 \\ \hline 671 \end{array}$$


$$\begin{array}{r} 685 \\ + 177 \\ \hline 862 \end{array}$$



$$\begin{array}{r} 923 \\ + 571 \\ \hline 1494 \end{array}$$



$$\begin{array}{r} 238 \\ + 237 \\ \hline 475 \end{array}$$


$$\begin{array}{r} 878 \\ + 251 \\ \hline 1129 \end{array}$$



$$\begin{array}{r} 872 \\ + 393 \\ \hline 1265 \end{array}$$


$$\begin{array}{r} 692 \\ + 894 \\ \hline 1586 \end{array}$$



$$\begin{array}{r} 523 \\ + 587 \\ \hline 1110 \end{array}$$


$$\begin{array}{r} 340 \\ + 560 \\ \hline 900 \end{array}$$


$$\begin{array}{r} 892 \\ + 162 \\ \hline 1054 \end{array}$$


$$\begin{array}{r} 155 \\ + 362 \\ \hline 517 \end{array}$$


$$\begin{array}{r} 323 \\ + 138 \\ \hline 461 \end{array}$$


$$\begin{array}{r} 910 \\ + 988 \\ \hline 1898 \end{array}$$



How many Easter eggs go in the basket?


10




# Easter Eggs in a Basket (I)

Put Easter eggs with sums greater than 999 in the basket.


$$\begin{array}{r} 778 \\ + 184 \\ \hline \end{array}$$



$$\begin{array}{r} 657 \\ + 223 \\ \hline \end{array}$$



$$\begin{array}{r} 301 \\ + 821 \\ \hline \end{array}$$



$$\begin{array}{r} 628 \\ + 428 \\ \hline \end{array}$$


$$\begin{array}{r} 760 \\ + 378 \\ \hline \end{array}$$



$$\begin{array}{r} 339 \\ + 745 \\ \hline \end{array}$$


$$\begin{array}{r} 192 \\ + 511 \\ \hline \end{array}$$



$$\begin{array}{r} 322 \\ + 636 \\ \hline \end{array}$$



$$\begin{array}{r} 409 \\ + 925 \\ \hline \end{array}$$


$$\begin{array}{r} 558 \\ + 135 \\ \hline \end{array}$$



$$\begin{array}{r} 416 \\ + 743 \\ \hline \end{array}$$



$$\begin{array}{r} 808 \\ + 471 \\ \hline \end{array}$$



$$\begin{array}{r} 613 \\ + 801 \\ \hline \end{array}$$



$$\begin{array}{r} 453 \\ + 540 \\ \hline \end{array}$$


$$\begin{array}{r} 943 \\ + 773 \\ \hline \end{array}$$


$$\begin{array}{r} 983 \\ + 531 \\ \hline \end{array}$$


$$\begin{array}{r} 261 \\ + 899 \\ \hline \end{array}$$


$$\begin{array}{r} 427 \\ + 870 \\ \hline \end{array}$$


$$\begin{array}{r} 259 \\ + 714 \\ \hline \end{array}$$


$$\begin{array}{r} 507 \\ + 447 \\ \hline \end{array}$$




How many Easter eggs go in the basket?


# Easter Eggs in a Basket (I) Answers


Put Easter eggs with sums greater than 999 in the basket.


$$\begin{array}{r} 778 \\ + 184 \\ \hline 962 \end{array}$$


$$\begin{array}{r} 657 \\ + 223 \\ \hline 880 \end{array}$$



$$\begin{array}{r} 301 \\ + 821 \\ \hline 1122 \end{array}$$


$$\begin{array}{r} 628 \\ + 428 \\ \hline 1056 \end{array}$$



$$\begin{array}{r} 760 \\ + 378 \\ \hline 1138 \end{array}$$



$$\begin{array}{r} 339 \\ + 745 \\ \hline 1084 \end{array}$$



$$\begin{array}{r} 192 \\ + 511 \\ \hline 703 \end{array}$$



$$\begin{array}{r} 322 \\ + 636 \\ \hline 958 \end{array}$$



$$\begin{array}{r} 409 \\ + 925 \\ \hline 1334 \end{array}$$


$$\begin{array}{r} 558 \\ + 135 \\ \hline 693 \end{array}$$



$$\begin{array}{r} 416 \\ + 743 \\ \hline 1159 \end{array}$$


$$\begin{array}{r} 808 \\ + 471 \\ \hline 1279 \end{array}$$


$$\begin{array}{r} 613 \\ + 801 \\ \hline 1414 \end{array}$$



$$\begin{array}{r} 453 \\ + 540 \\ \hline 993 \end{array}$$



$$\begin{array}{r} 943 \\ + 773 \\ \hline 1716 \end{array}$$


$$\begin{array}{r} 983 \\ + 531 \\ \hline 1514 \end{array}$$


$$\begin{array}{r} 261 \\ + 899 \\ \hline 1160 \end{array}$$


$$\begin{array}{r} 427 \\ + 870 \\ \hline 1297 \end{array}$$


$$\begin{array}{r} 259 \\ + 714 \\ \hline 973 \end{array}$$


$$\begin{array}{r} 507 \\ + 447 \\ \hline 954 \end{array}$$



How many Easter eggs go in the basket?


12


# Easter Eggs in a Basket (J)

Put Easter eggs with sums greater than 999 in the basket.



$$\begin{array}{r} 457 \\ + 145 \\ \hline \end{array}$$


$$\begin{array}{r} 903 \\ + 713 \\ \hline \end{array}$$


$$\begin{array}{r} 984 \\ + 586 \\ \hline \end{array}$$



$$\begin{array}{r} 654 \\ + 251 \\ \hline \end{array}$$



$$\begin{array}{r} 614 \\ + 332 \\ \hline \end{array}$$



$$\begin{array}{r} 620 \\ + 101 \\ \hline \end{array}$$



$$\begin{array}{r} 659 \\ + 801 \\ \hline \end{array}$$



$$\begin{array}{r} 681 \\ + 349 \\ \hline \end{array}$$


$$\begin{array}{r} 862 \\ + 698 \\ \hline \end{array}$$


$$\begin{array}{r} 462 \\ + 197 \\ \hline \end{array}$$



$$\begin{array}{r} 331 \\ + 146 \\ \hline \end{array}$$



$$\begin{array}{r} 708 \\ + 317 \\ \hline \end{array}$$



$$\begin{array}{r} 393 \\ + 535 \\ \hline \end{array}$$



$$\begin{array}{r} 331 \\ + 883 \\ \hline \end{array}$$



$$\begin{array}{r} 485 \\ + 274 \\ \hline \end{array}$$


$$\begin{array}{r} 453 \\ + 415 \\ \hline \end{array}$$


$$\begin{array}{r} 170 \\ + 747 \\ \hline \end{array}$$


$$\begin{array}{r} 673 \\ + 988 \\ \hline \end{array}$$


$$\begin{array}{r} 626 \\ + 616 \\ \hline \end{array}$$



$$\begin{array}{r} 755 \\ + 258 \\ \hline \end{array}$$



How many Easter eggs go in the basket?


# Easter Eggs in a Basket (J) Answers


Put Easter eggs with sums greater than 999 in the basket.



$$\begin{array}{r} 457 \\ + 145 \\ \hline 602 \end{array}$$


$$\begin{array}{r} 903 \\ + 713 \\ \hline 1616 \end{array}$$


$$\begin{array}{r} 984 \\ + 586 \\ \hline 1570 \end{array}$$


$$\begin{array}{r} 654 \\ + 251 \\ \hline 905 \end{array}$$



$$\begin{array}{r} 614 \\ + 332 \\ \hline 946 \end{array}$$



$$\begin{array}{r} 620 \\ + 101 \\ \hline 721 \end{array}$$



$$\begin{array}{r} 659 \\ + 801 \\ \hline 1460 \end{array}$$



$$\begin{array}{r} 681 \\ + 349 \\ \hline 1030 \end{array}$$


$$\begin{array}{r} 862 \\ + 698 \\ \hline 1560 \end{array}$$



$$\begin{array}{r} 462 \\ + 197 \\ \hline 659 \end{array}$$



$$\begin{array}{r} 331 \\ + 146 \\ \hline 477 \end{array}$$


$$\begin{array}{r} 708 \\ + 317 \\ \hline 1025 \end{array}$$



$$\begin{array}{r} 393 \\ + 535 \\ \hline 928 \end{array}$$



$$\begin{array}{r} 331 \\ + 883 \\ \hline 1214 \end{array}$$



$$\begin{array}{r} 485 \\ + 274 \\ \hline 759 \end{array}$$


$$\begin{array}{r} 453 \\ + 415 \\ \hline 868 \end{array}$$


$$\begin{array}{r} 170 \\ + 747 \\ \hline 917 \end{array}$$


$$\begin{array}{r} 673 \\ + 988 \\ \hline 1661 \end{array}$$


$$\begin{array}{r} 626 \\ + 616 \\ \hline 1242 \end{array}$$


$$\begin{array}{r} 755 \\ + 258 \\ \hline 1013 \end{array}$$



How many Easter eggs go in the basket?

10