




Easter Eggs in a Basket (B)

Put Easter eggs with sums greater than 25 in the basket.



$$\begin{array}{r} 4 \\ + 6 \\ \hline \end{array}$$



$$\begin{array}{r} 2 \\ + 15 \\ \hline \end{array}$$



$$\begin{array}{r} 18 \\ + 17 \\ \hline \end{array}$$



$$\begin{array}{r} 14 \\ + 2 \\ \hline \end{array}$$



$$\begin{array}{r} 19 \\ + 22 \\ \hline \end{array}$$



$$\begin{array}{r} 4 \\ + 3 \\ \hline \end{array}$$



$$\begin{array}{r} 8 \\ + 20 \\ \hline \end{array}$$



$$\begin{array}{r} 9 \\ + 22 \\ \hline \end{array}$$



$$\begin{array}{r} 4 \\ + 24 \\ \hline \end{array}$$



$$\begin{array}{r} 12 \\ + 15 \\ \hline \end{array}$$



$$\begin{array}{r} 17 \\ + 2 \\ \hline \end{array}$$



$$\begin{array}{r} 15 \\ + 24 \\ \hline \end{array}$$



$$\begin{array}{r} 18 \\ + 5 \\ \hline \end{array}$$



$$\begin{array}{r} 5 \\ + 4 \\ \hline \end{array}$$



$$\begin{array}{r} 25 \\ + 24 \\ \hline \end{array}$$


$$\begin{array}{r} 21 \\ + 7 \\ \hline \end{array}$$


$$\begin{array}{r} 11 \\ + 20 \\ \hline \end{array}$$


$$\begin{array}{r} 22 \\ + 14 \\ \hline \end{array}$$


$$\begin{array}{r} 15 \\ + 5 \\ \hline \end{array}$$


$$\begin{array}{r} 12 \\ + 11 \\ \hline \end{array}$$



How many Easter eggs go in the basket?