



Easter Eggs in a Basket (C)

Put Easter eggs with sums greater than 25 in the basket.



$$\begin{array}{r} 17 \\ + 23 \\ \hline \end{array}$$



$$\begin{array}{r} 3 \\ + 2 \\ \hline \end{array}$$



$$\begin{array}{r} 8 \\ + 20 \\ \hline \end{array}$$



$$\begin{array}{r} 16 \\ + 3 \\ \hline \end{array}$$



$$\begin{array}{r} 16 \\ + 3 \\ \hline \end{array}$$



$$\begin{array}{r} 3 \\ + 9 \\ \hline \end{array}$$



$$\begin{array}{r} 20 \\ + 9 \\ \hline \end{array}$$



$$\begin{array}{r} 16 \\ + 24 \\ \hline \end{array}$$


$$\begin{array}{r} 13 \\ + 8 \\ \hline \end{array}$$


$$\begin{array}{r} 24 \\ + 25 \\ \hline \end{array}$$



$$\begin{array}{r} 10 \\ + 6 \\ \hline \end{array}$$



$$\begin{array}{r} 25 \\ + 18 \\ \hline \end{array}$$


$$\begin{array}{r} 17 \\ + 11 \\ \hline \end{array}$$



$$\begin{array}{r} 23 \\ + 6 \\ \hline \end{array}$$


$$\begin{array}{r} 8 \\ + 5 \\ \hline \end{array}$$


$$\begin{array}{r} 6 \\ + 3 \\ \hline \end{array}$$


$$\begin{array}{r} 13 \\ + 12 \\ \hline \end{array}$$


$$\begin{array}{r} 6 \\ + 7 \\ \hline \end{array}$$


$$\begin{array}{r} 25 \\ + 22 \\ \hline \end{array}$$



$$\begin{array}{r} 8 \\ + 14 \\ \hline \end{array}$$





How many Easter eggs go in the basket?


Easter Eggs in a Basket (C) Answers


Put Easter eggs with sums greater than 25 in the basket.


$$\begin{array}{r} 17 \\ + 23 \\ \hline 40 \end{array}$$


$$\begin{array}{r} 3 \\ + 2 \\ \hline 5 \end{array}$$



$$\begin{array}{r} 8 \\ + 20 \\ \hline 28 \end{array}$$



$$\begin{array}{r} 16 \\ + 3 \\ \hline 19 \end{array}$$



$$\begin{array}{r} 16 \\ + 3 \\ \hline 19 \end{array}$$



$$\begin{array}{r} 3 \\ + 9 \\ \hline 12 \end{array}$$



$$\begin{array}{r} 20 \\ + 9 \\ \hline 29 \end{array}$$



$$\begin{array}{r} 16 \\ + 24 \\ \hline 40 \end{array}$$



$$\begin{array}{r} 13 \\ + 8 \\ \hline 21 \end{array}$$



$$\begin{array}{r} 24 \\ + 25 \\ \hline 49 \end{array}$$



$$\begin{array}{r} 10 \\ + 6 \\ \hline 16 \end{array}$$


$$\begin{array}{r} 25 \\ + 18 \\ \hline 43 \end{array}$$



$$\begin{array}{r} 17 \\ + 11 \\ \hline 28 \end{array}$$



$$\begin{array}{r} 23 \\ + 6 \\ \hline 29 \end{array}$$



$$\begin{array}{r} 8 \\ + 5 \\ \hline 13 \end{array}$$


$$\begin{array}{r} 6 \\ + 3 \\ \hline 9 \end{array}$$


$$\begin{array}{r} 13 \\ + 12 \\ \hline 25 \end{array}$$


$$\begin{array}{r} 6 \\ + 7 \\ \hline 13 \end{array}$$


$$\begin{array}{r} 25 \\ + 22 \\ \hline 47 \end{array}$$


$$\begin{array}{r} 8 \\ + 14 \\ \hline 22 \end{array}$$



How many Easter eggs go in the basket?

9