



Easter Eggs in a Basket (C)

Put Easter eggs with sums greater than 25 in the basket.



$$\begin{array}{r} 17 \\ + 23 \\ \hline \end{array}$$



$$\begin{array}{r} 3 \\ + 2 \\ \hline \end{array}$$



$$\begin{array}{r} 8 \\ + 20 \\ \hline \end{array}$$



$$\begin{array}{r} 16 \\ + 3 \\ \hline \end{array}$$



$$\begin{array}{r} 16 \\ + 3 \\ \hline \end{array}$$



$$\begin{array}{r} 3 \\ + 9 \\ \hline \end{array}$$



$$\begin{array}{r} 20 \\ + 9 \\ \hline \end{array}$$



$$\begin{array}{r} 16 \\ + 24 \\ \hline \end{array}$$


$$\begin{array}{r} 13 \\ + 8 \\ \hline \end{array}$$


$$\begin{array}{r} 24 \\ + 25 \\ \hline \end{array}$$



$$\begin{array}{r} 10 \\ + 6 \\ \hline \end{array}$$



$$\begin{array}{r} 25 \\ + 18 \\ \hline \end{array}$$


$$\begin{array}{r} 17 \\ + 11 \\ \hline \end{array}$$



$$\begin{array}{r} 23 \\ + 6 \\ \hline \end{array}$$


$$\begin{array}{r} 8 \\ + 5 \\ \hline \end{array}$$


$$\begin{array}{r} 6 \\ + 3 \\ \hline \end{array}$$


$$\begin{array}{r} 13 \\ + 12 \\ \hline \end{array}$$


$$\begin{array}{r} 6 \\ + 7 \\ \hline \end{array}$$


$$\begin{array}{r} 25 \\ + 22 \\ \hline \end{array}$$


$$\begin{array}{r} 8 \\ + 14 \\ \hline \end{array}$$



How many Easter eggs go in the basket?