





Easter Eggs in a Basket (F)


Put Easter eggs with sums greater than 25 in the basket.


$$\begin{array}{r} 18 \\ + 11 \\ \hline \end{array}$$



$$\begin{array}{r} 21 \\ + 18 \\ \hline \end{array}$$



$$\begin{array}{r} 5 \\ + 2 \\ \hline \end{array}$$



$$\begin{array}{r} 16 \\ + 3 \\ \hline \end{array}$$



$$\begin{array}{r} 21 \\ + 14 \\ \hline \end{array}$$



$$\begin{array}{r} 14 \\ + 18 \\ \hline \end{array}$$



$$\begin{array}{r} 25 \\ + 15 \\ \hline \end{array}$$


$$\begin{array}{r} 17 \\ + 6 \\ \hline \end{array}$$



$$\begin{array}{r} 22 \\ + 6 \\ \hline \end{array}$$



$$\begin{array}{r} 16 \\ + 24 \\ \hline \end{array}$$



$$\begin{array}{r} 22 \\ + 24 \\ \hline \end{array}$$



$$\begin{array}{r} 14 \\ + 4 \\ \hline \end{array}$$



$$\begin{array}{r} 7 \\ + 6 \\ \hline \end{array}$$



$$\begin{array}{r} 11 \\ + 10 \\ \hline \end{array}$$



$$\begin{array}{r} 22 \\ + 3 \\ \hline \end{array}$$


$$\begin{array}{r} 14 \\ + 12 \\ \hline \end{array}$$


$$\begin{array}{r} 19 \\ + 6 \\ \hline \end{array}$$


$$\begin{array}{r} 21 \\ + 19 \\ \hline \end{array}$$


$$\begin{array}{r} 19 \\ + 8 \\ \hline \end{array}$$



$$\begin{array}{r} 18 \\ + 15 \\ \hline \end{array}$$





How many Easter eggs go in the basket?


Easter Eggs in a Basket (F) Answers


Put Easter eggs with sums greater than 25 in the basket.



$$\begin{array}{r} 18 \\ + 11 \\ \hline 29 \end{array}$$



$$\begin{array}{r} 21 \\ + 18 \\ \hline 39 \end{array}$$



$$\begin{array}{r} 5 \\ + 2 \\ \hline 7 \end{array}$$



$$\begin{array}{r} 16 \\ + 3 \\ \hline 19 \end{array}$$



$$\begin{array}{r} 21 \\ + 14 \\ \hline 35 \end{array}$$



$$\begin{array}{r} 14 \\ + 18 \\ \hline 32 \end{array}$$



$$\begin{array}{r} 25 \\ + 15 \\ \hline 40 \end{array}$$



$$\begin{array}{r} 17 \\ + 6 \\ \hline 23 \end{array}$$



$$\begin{array}{r} 22 \\ + 6 \\ \hline 28 \end{array}$$



$$\begin{array}{r} 16 \\ + 24 \\ \hline 40 \end{array}$$



$$\begin{array}{r} 22 \\ + 24 \\ \hline 46 \end{array}$$



$$\begin{array}{r} 14 \\ + 4 \\ \hline 18 \end{array}$$



$$\begin{array}{r} 7 \\ + 6 \\ \hline 13 \end{array}$$



$$\begin{array}{r} 11 \\ + 10 \\ \hline 21 \end{array}$$



$$\begin{array}{r} 22 \\ + 3 \\ \hline 25 \end{array}$$


$$\begin{array}{r} 14 \\ + 12 \\ \hline 26 \end{array}$$


$$\begin{array}{r} 19 \\ + 6 \\ \hline 25 \end{array}$$


$$\begin{array}{r} 21 \\ + 19 \\ \hline 40 \end{array}$$


$$\begin{array}{r} 19 \\ + 8 \\ \hline 27 \end{array}$$


$$\begin{array}{r} 18 \\ + 15 \\ \hline 33 \end{array}$$



How many Easter eggs go in the basket?

12