


Easter Eggs in a Basket (G)


Put Easter eggs with sums greater than 25 in the basket.



$$\begin{array}{r} 18 \\ + 20 \\ \hline \end{array}$$



$$\begin{array}{r} 24 \\ + 5 \\ \hline \end{array}$$



$$\begin{array}{r} 19 \\ + 6 \\ \hline \end{array}$$



$$\begin{array}{r} 19 \\ + 13 \\ \hline \end{array}$$



$$\begin{array}{r} 3 \\ + 2 \\ \hline \end{array}$$



$$\begin{array}{r} 6 \\ + 11 \\ \hline \end{array}$$



$$\begin{array}{r} 19 \\ + 19 \\ \hline \end{array}$$



$$\begin{array}{r} 21 \\ + 17 \\ \hline \end{array}$$



$$\begin{array}{r} 21 \\ + 16 \\ \hline \end{array}$$



$$\begin{array}{r} 18 \\ + 3 \\ \hline \end{array}$$



$$\begin{array}{r} 13 \\ + 13 \\ \hline \end{array}$$



$$\begin{array}{r} 19 \\ + 22 \\ \hline \end{array}$$



$$\begin{array}{r} 15 \\ + 21 \\ \hline \end{array}$$



$$\begin{array}{r} 22 \\ + 17 \\ \hline \end{array}$$


$$\begin{array}{r} 7 \\ + 14 \\ \hline \end{array}$$


$$\begin{array}{r} 5 \\ + 18 \\ \hline \end{array}$$


$$\begin{array}{r} 3 \\ + 15 \\ \hline \end{array}$$


$$\begin{array}{r} 12 \\ + 4 \\ \hline \end{array}$$


$$\begin{array}{r} 5 \\ + 7 \\ \hline \end{array}$$


$$\begin{array}{r} 8 \\ + 9 \\ \hline \end{array}$$



How many Easter eggs go in the basket?